

# UNIT 1: Penghasilan Projek

## **PBD** SISTEM ASAS ELEKTROMEKANIKAL

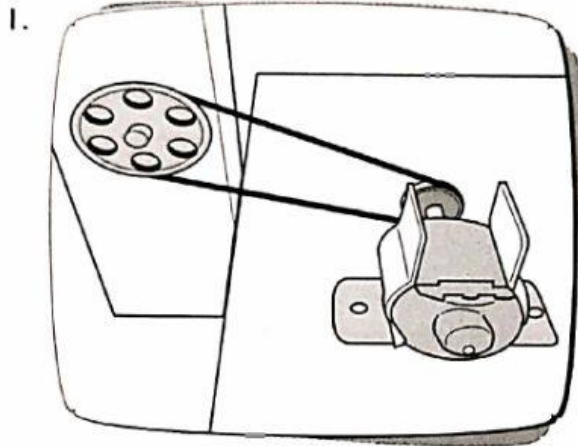
A. Tuliskan nama komponen yang digunakan dalam sistem elektromekanikal di bawah. SP4.3.4

**TP2**

Motor dan gear

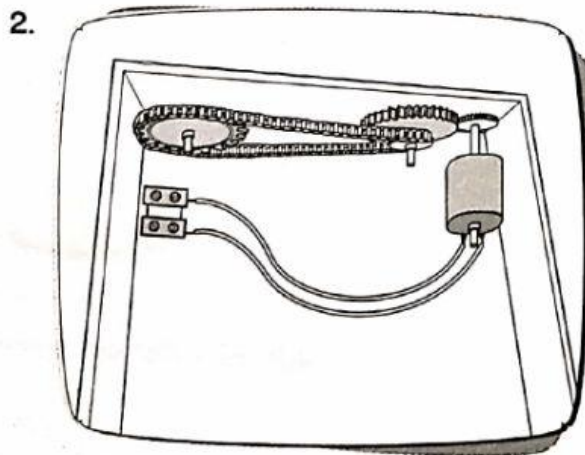
Motor, takal, dan tali sawat

Motor, gegancu, dan rantai



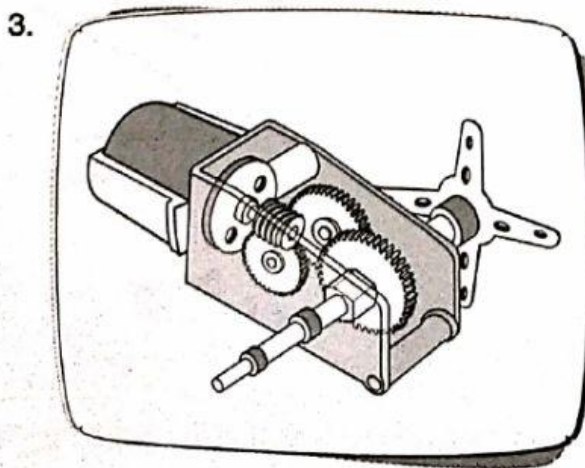
---

---



---

---



---

---

TP

