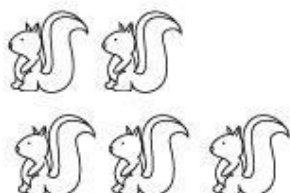



Name _____


$$\begin{array}{r} 2 \\ + 3 \\ \hline \end{array}$$




$$\begin{array}{r} 1 \\ + 3 \\ \hline \end{array}$$




$$\begin{array}{r} 2 \\ + 4 \\ \hline \end{array}$$



$$\begin{array}{r} 1 \\ + 4 \\ \hline \end{array}$$



$$\begin{array}{r} 3 \\ + 4 \\ \hline \end{array}$$



$$\begin{array}{r} 5 \\ + 2 \\ \hline \end{array}$$

