



Ascending and Descending Order


Name: _____ Date: _____

A. Arrange the numbers in **ascending** order on the shells.



1. 49, 72, 36




2. 3, 105, 12




3. 98, 45, 86



4. 25, 77, 27




5. 100, 44, 123



B. Arrange the numbers in *descending* order on the beachballs.


6. 89, 51, 92




7. 55, 149, 14



8. 65, 49, 132



9. 112, 34, 70



10. 65, 152, 8

