





Handling Data (Grade 2)

Count the flowers – rose, lotus, jasmine & orchid & Write the number correctly in the list.



Look at the list and answer the following.

1. Which flower is the most in number?
2. Which flower is the least in number?
3. How many flowers are there in all?
4. How many types of flowers are there?