

Smart Chart

Roll No.

A pie chart illustrating the distribution of preferences among a group. The chart is divided into three equal sectors, each representing 25% of the total. The largest sector, on the left, is labeled 'Those who Like Milkshake'. The top-right sector is labeled 'Those who like Ice-Cream', and the bottom-right sector is labeled 'Those who like juice'.

Preference	Percentage
Those who Like Milkshake	50%
Those who like Ice-Cream	25%
Those who like juice	25%

(i) One – third (ii) One – fourth (iii) Three- fourth


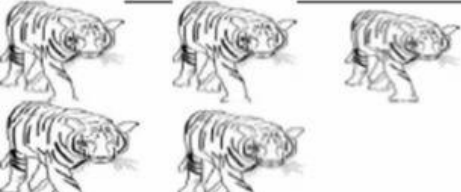


i) One – third (ii) Half (iii) One fourth

(i) Milk shake and Juice (ii) Milk shake and Ice cream

d) If total numbers of children are 600 then tell the number of

children like: (i) Ice – cream (ii) Milk shake
 (iii) Juice

2) Ajay made a record of his favourite animals he saw in the zoo. Write the number and answer the following questions.

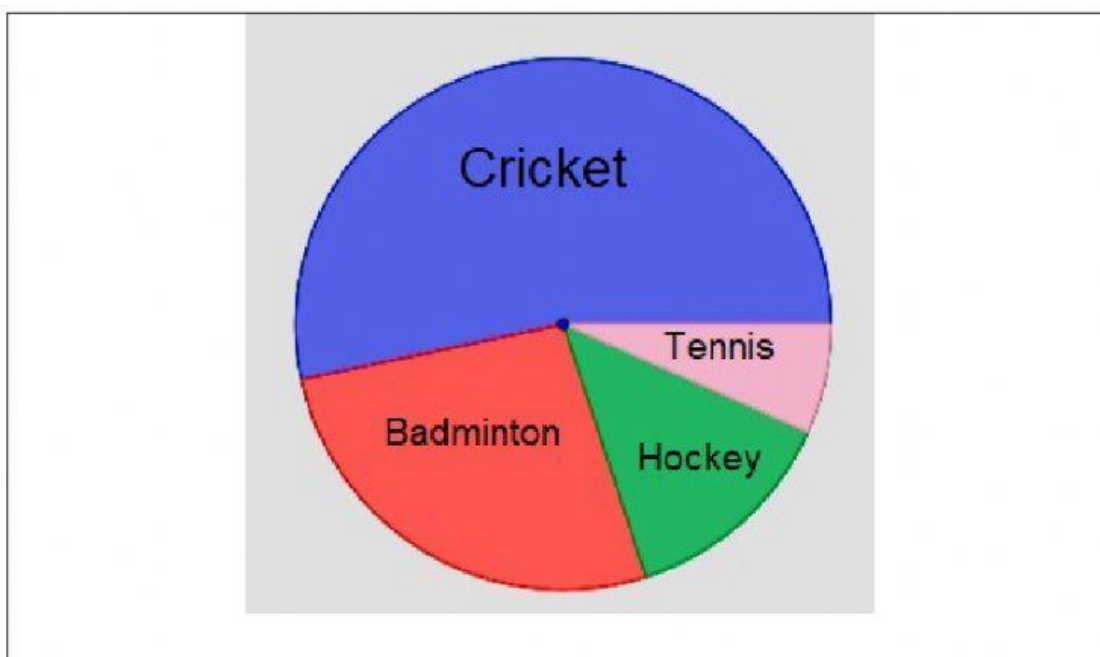
Animals	Numbers
 Elephant	
 Tiger	
 Deer	
 Monkey	

a. How many animals did Ajay see altogether?

b. Which animal is least in number?

c. Which animal is maximum in number?

3) Look at the chapatti chart/ pie chart showing different sports liked by people-



(a) Which is the most popular sport?

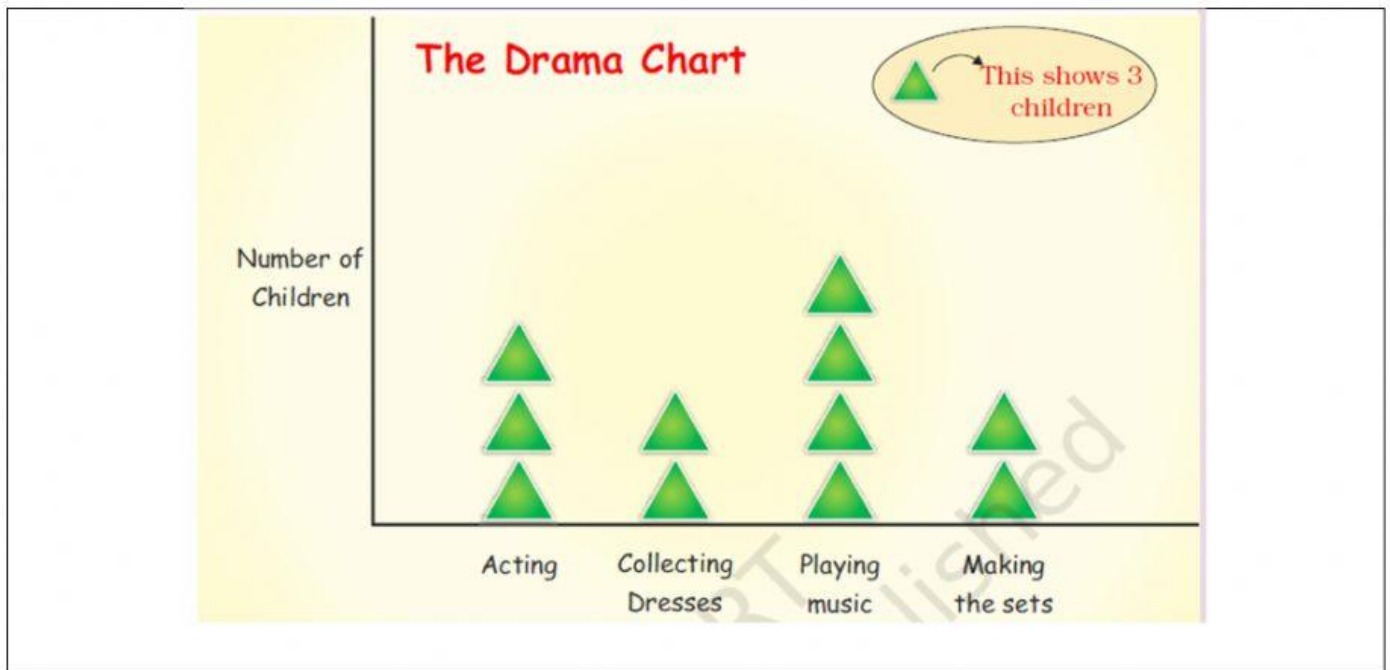
(b) Which is the least popular sport?

(c) Which is more-

No. of people who like hockey

No. of people who like badminton

4) All children of a class are getting ready for a drama. Some children are acting. Some are busy collecting the dresses. Some are bringing tables and chairs to make the sets.



- a) How many children are acting in the drama?
- b) Which are more—children making the sets or those acting?
- c) What is being done by most of the children?
- d) How many children are collecting dresses?

Prepared by
Abhishek PRT
KV Mancheri