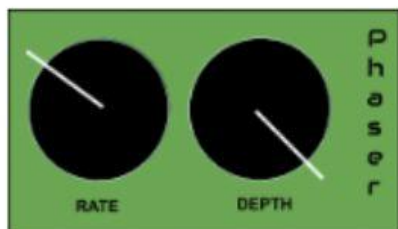


#### Question 4.4

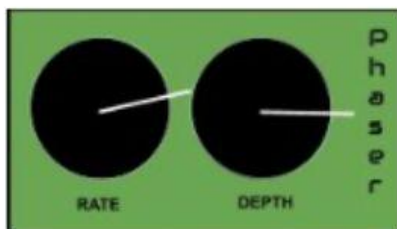
You will hear two versions of a recording of an electric piano. The first version has no additional effects or processes. The second version has had a phaser applied.

- Identify which phaser setting shown below (1, 2 or 3) has been applied, and justify your answer.

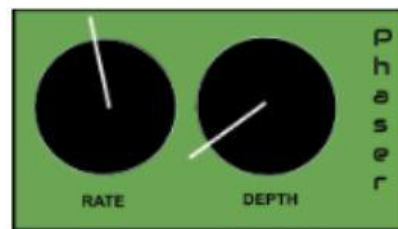
1:



2:



3:



Chorus applied (1, 2 or 3)

a) Justification

---

---

- Listen to another excerpt. A harmoniser has been applied to the vocal recording. Name the process that has also been applied to the vocal sample.

b) Process

---

- Listen to the excerpt again. EQ has been used - identify **two** controls on a parametric EQ effects processor.

c) Control 1

---

Control 2

---