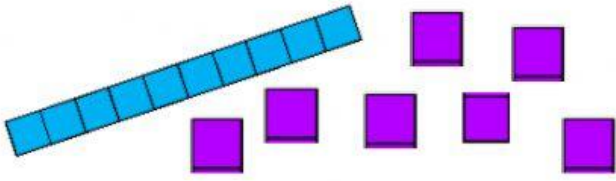


Adding within 20

1. Add



$$10 + 7 = \underline{\quad\quad}$$



$$10 + 3 = \underline{\quad\quad}$$




$$10 + 8 = \underline{\quad\quad}$$




$$10 + 4 = \underline{\quad\quad}$$

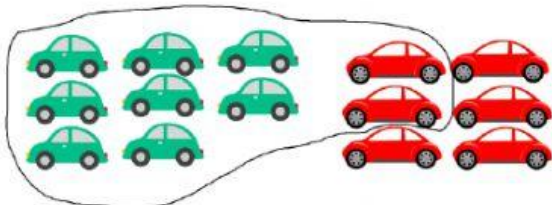
2. Add



$$7 + 5 = \underline{\quad\quad}$$



$$9 + 6 = \underline{\quad\quad}$$



$$8 + 6 = \underline{\quad\quad}$$



$$7 + 9 = \underline{\quad\quad}$$