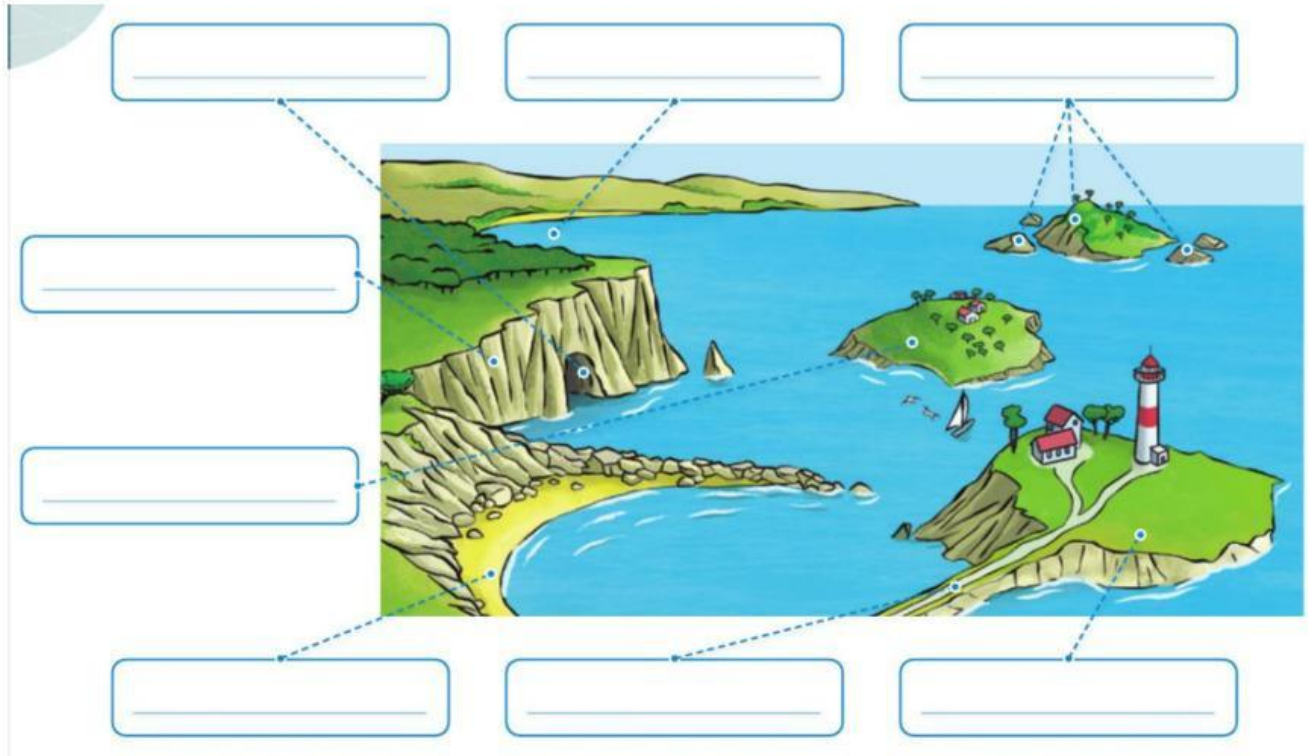




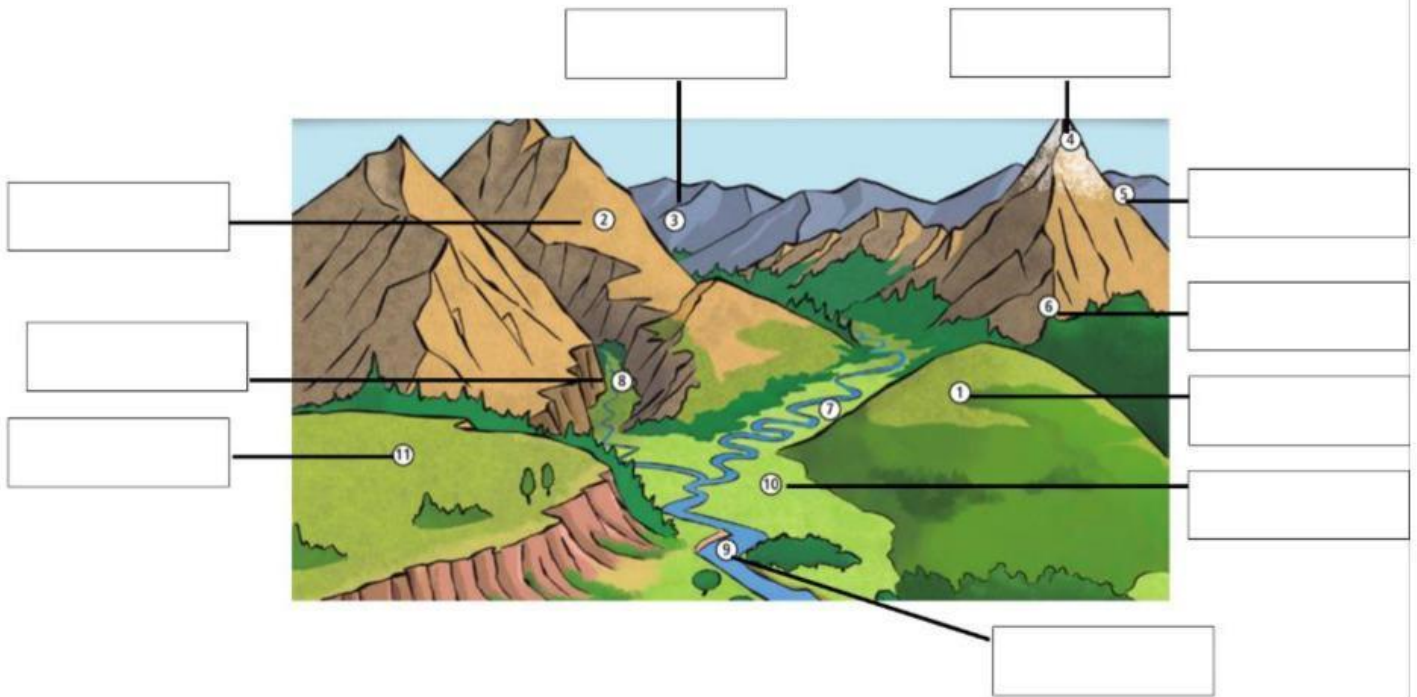
1. Write the parts of the coastal landforms.



2. Fill the gaps of the coastal landform definitions.

- A cliff is a \_\_\_\_\_, \_\_\_\_\_ land on the \_\_\_\_\_.
- Some cliffs have \_\_\_\_\_ in them.
- An \_\_\_\_\_ is land with water around it.
- An archipelago is a \_\_\_\_\_ of \_\_\_\_\_.
- An \_\_\_\_\_ is a small island.
- A peninsula has \_\_\_\_\_ around the most of its sides.
- An \_\_\_\_\_ connects a peninsula to the coast.
- A bay is \_\_\_\_\_ part of the \_\_\_\_\_. Some bays have a \_\_\_\_\_ with sand or stones.

**3. Write the parts of the inland landforms.**



**4. Answer these questions.**

What is a hill?

---


What is a mountain?

---

What is a mountain range?

---

**5. Write the parts of the mountain.**



**6. Match the name to its definition:**

Valley

Canyon

Rivers

Plain

Plateau

flow through valleys and across plains.


is a low, flat area.

is a low area between hills or mountains.

is a high, flat area with low land around it.

is a deep valley with high, vertical sides.

**7. What are these minerals? Choose the correct option.**



**8. Choose: True or False.**

1. Minerals are solid substances with an internal structure. **True / False**
2. Minerals can have 1, 2 or more particles. **True / False**
3. Rocks are liquid substances that contains minerals. **True / False**
4. There are 2 types of rocks igneous and sedimentary rocks. **True / False**
5. Metamorphic rocks don't change under a lot of heat. **True / False**

