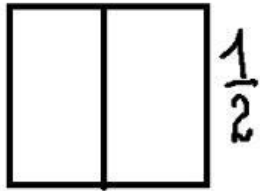
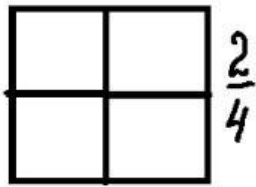


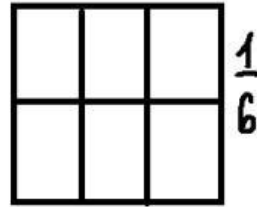
# Proble



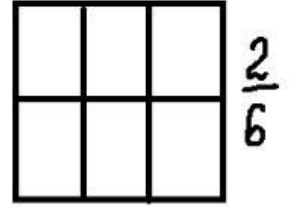
$$\frac{1}{2}$$



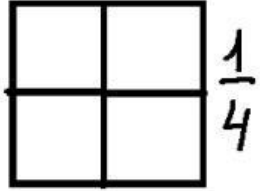
$$\frac{2}{4}$$



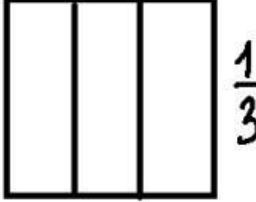
$$\frac{1}{6}$$



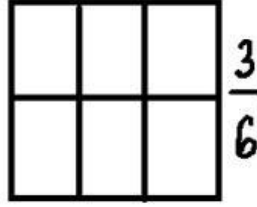
$$\frac{2}{6}$$



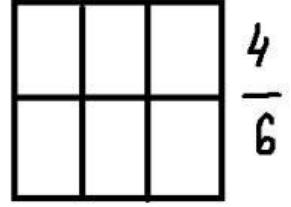
$$\frac{1}{4}$$



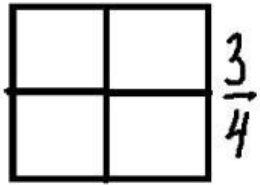
$$\frac{1}{3}$$



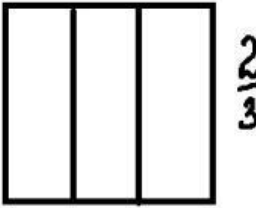
$$\frac{3}{6}$$



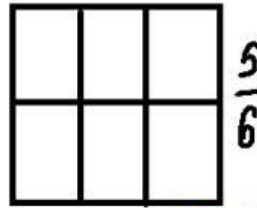
$$\frac{4}{6}$$



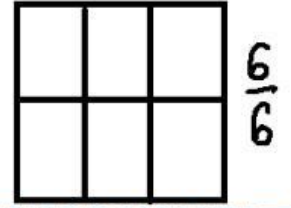
$$\frac{3}{4}$$



$$\frac{2}{3}$$



$$\frac{5}{6}$$



$$\frac{6}{6}$$