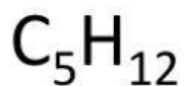
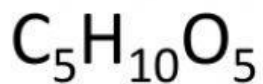
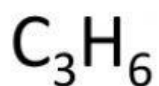


Empirical Formula

Write the empirical formula for each compound:

Molecular formula



Empirical formula

