

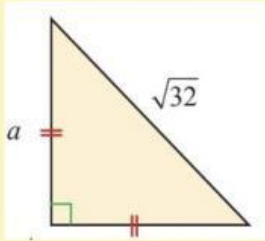
## LKPD TEOREMA PYTHAGORAS-2

NAMA : .....

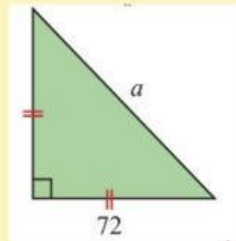
KELAS : .....



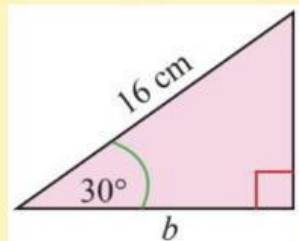
*Tentukan panjang sisi-sisi yang belum diketahui pada gambar berikut.*



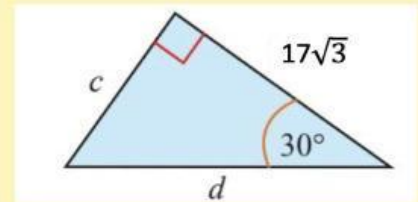
$a = \dots$



$a = \dots\sqrt{\dots}$



$b = \dots\sqrt{\dots}$



$c = \dots$       $d = \dots$

