

Student name:	Topic 2: Work with Equal Groups.
Grade: 2/.....	Date: /10/2023

Revision Worksheet

Q1: Chosse the correct answer.

1) Choose all the numbers that are odd.

- a) 13 b) 14 c) 17 d) 20

2) Choose all the numbers that are even.

- b) 11 b) 12 c) 17 d) 20

3) Which addition sentence has an even sum?

- a) $2+2 = 4$ c) $7+6 = 13$

- b) $2+7 = 9$ d) $6+9 = 15$

4) Which addition sentence has an **odd** sum?

- c) $2+2 = 4$ c) $7+6 = 13$

- d) $7+7 = 14$ d) $9+9 = 18$

5) Which addition sentence has an **even** sum?



a) $3 + 2 = 5$

c) 8 + 8 = 16

b) $4 + 9 = 13$

d) 5 + 4 = 9

6) Which shows an array of 2 row with 3 oranges in each row?



7) Omar puts 7 candies in a jar. He puts 7 candies in another jar.

Is the number of candies odd or even?


a) Even

b) Odd

Q2: Write an addition equation to represent the array.

by rows: +.....

by columns:++.....



Q3: Sally arranges some oranges in an array.

Complete the statements to describe the array.

- 1- There are rows of oranges.
- 2- There are oranges in each row.
- 3- There are oranges in all.

