




Name : _____


Addition up to 20


Add the numbers, and write the answer in the box.


1. 
$$\begin{array}{r} 9 \\ + 8 \\ \hline \\ \hline \end{array}$$


2. 
$$\begin{array}{r} 6 \\ + 5 \\ \hline \\ \hline \end{array}$$

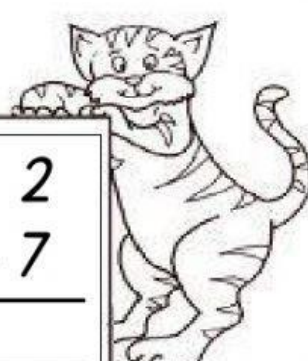
3. 
$$\begin{array}{r} 4 \\ + 8 \\ \hline \\ \hline \end{array}$$


4. 
$$\begin{array}{r} 6 \\ + 8 \\ \hline \\ \hline \end{array}$$

5. 
$$\begin{array}{r} 6 \\ + 7 \\ \hline \\ \hline \end{array}$$

6. 
$$\begin{array}{r} 5 \\ + 8 \\ \hline \\ \hline \end{array}$$

7. 
$$\begin{array}{r} 3 \\ + 8 \\ \hline \\ \hline \end{array}$$

8. 
$$\begin{array}{r} 2 \\ + 7 \\ \hline \\ \hline \end{array}$$

9. 
$$\begin{array}{r} 3 \\ + 4 \\ \hline \\ \hline \end{array}$$