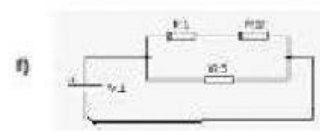
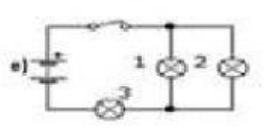
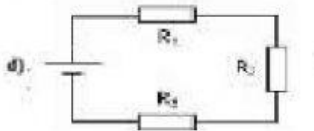
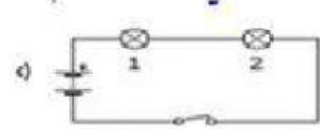
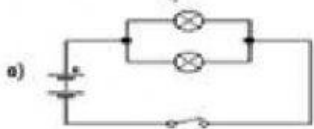
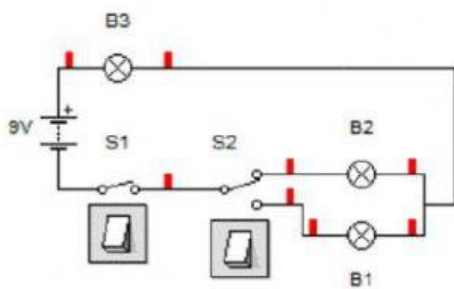


# ELECTRICAL CIRCUITS

1. Decide if the following circuits are connected in series, parallel or in a combination circuit.



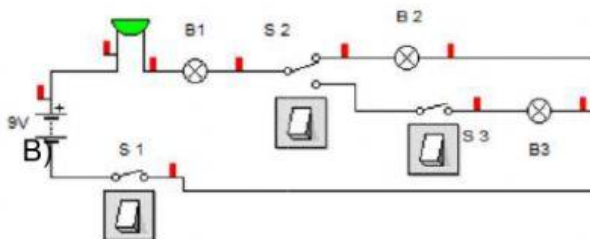
2. Indicate which components will be activated if:



A) We do not press any switch

B) We press S1

C) We press S1 and S2



A) We do not press any switch

B) We press S1

C) press S1 and S3

D) We press S1, S2 and S3.