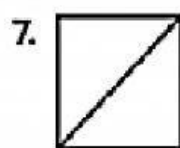


Write how many equal parts. Shade one part. Write its unit fraction.




_____ equal parts

unit fraction:



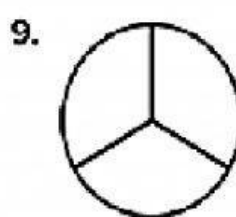
_____ equal parts

unit fraction:



_____ equal parts

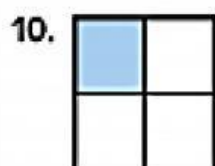
unit fraction:



_____ equal parts

unit fraction:

Circle the correct unit fraction for the shaded section of each model.



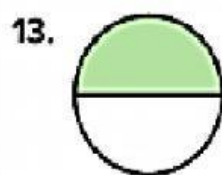
$\frac{1}{3}$ $\frac{1}{4}$



$\frac{1}{8}$ $\frac{1}{6}$



$\frac{1}{5}$ $\frac{1}{6}$



$\frac{1}{2}$ $\frac{1}{3}$



$\frac{1}{3}$ $\frac{1}{4}$



$\frac{1}{5}$ $\frac{1}{6}$

