

AL-REEYADA INTERNATIONAL SCHOOL

MAHASEN ARAMCO, AL-AHSA, KINGDOM OF SAUDI ARABIA

S.Y. 2023-2024

FIRST TERM

Science Grade 2 Worksheet

Part I

SECTION A

I. Multiple Choice. Read the sentences carefully and drag the letter of your answer on the space before each number.

_____ 1. It is a plant that lives for a short time.

- a. Climber b. Herb c. Shrub

_____ 2. It is a plant that is smaller than trees and live for many years.

- a. Shrub b. Climber c. Herb

_____ 3. It is a plant that is tall and strong.

- a. Shrub b. Tree c. Herb

_____ 4. It is a small plant with soft, green stem.

- a. Herb b. Shrub c. Climber

_____ 5. It is a plant that needs support to climb up.

- a. Mint b. Mango tree c. Money plant

_____ 6. It is the biggest herb.

- a. Fir tree b. Banana plant c. Neem tree

_____ 7. It is a bushy plant with hard and thin stem.

- a. Coriander b. Grapevine c. Cotton plant

_____ 8. It is a plant that has a hard and thick stem.

- a. Mint b. Coconut tree c. Rose bush

II. Odd-one-out: Choose the word that does not belong to the group. Drag your answer on the line provided.

- | | | | |
|------------------|--------------|--------------|-------|
| 1. Bougainvillea | Mint | Coriander | _____ |
| 2. Neem Tree | Grapevine | Money Plant | _____ |
| 3. Mango Tree | Banana Plant | Fir Tree | _____ |
| 4. Beanstalk | Grapevine | Banana plant | _____ |
| 5. Trees | Herbs | Shrubs | _____ |

III. Name at least two plants on each type of plant. Write your answer in the boxes.

Trees	Shrubs	Herbs	Climbers
1. <input type="text"/>	1. <input type="text"/>	1. <input type="text"/>	1. <input type="text"/>
2. <input type="text"/>	2. <input type="text"/>	2. <input type="text"/>	2. <input type="text"/>

IV. Identify what is asked by dragging the correct answer on the line.

- These are plants that cannot stand on their own. _____
- They are also called bushes. _____
- They live only for a few years or months. _____
- They are tall and strong plants. _____

Shrubs	Trees	Climbers	Herbs
--------	-------	----------	-------

Part 2

SECTION B

V. TRUE OR FALSE. Determine whether the statements are True or False. Click the drop down button to choose your answer.

_____ 1. Shrubs are small plants with soft and thin stems.

_____ 2. Trees have a hard and thin stem called a trunk.

_____ 3. Money plants have thick and weak stems.

_____ 4. Mango trees have many branches.

_____ 5. Trees have same sizes and shapes.

VI. Draw a line using the pencil symbol to match the sentences in A with the examples in B.

A

1. It is a tall and strong plant.
2. It is a bushy plant.
3. It is a plant that has a thin and weak stem.
4. It is the biggest herb.
5. It is a plant that can live for short time.

B

- a. Wheat
- b. Grapevine
- c. Cotton plant
- d. Neem tree
- e. Banana plant





VII. Group the names of plants to which type they belong. Drag the word to their correct column.

Trees	Herbs	Climbers	Shrubs
1.	1.	1.	1.
2.	2.	2.	2.
3.	3.	3.	3.

Names of plants: Bougainvillea Cotton Plant Banana Plant
 Mint Mango Tree Beanstalk
 Coconut Tree Coriander Rose Bush
 Grapevine Money Plant Fir Tree

Part 3
SECTION C

VIII. Fill in the gaps with the correct word. Click the drop down button for your answer.

	<p>1. Trees have _____ and thick stems called a _____.</p>
	<p>2. _____ have hard and _____ stems.</p>
	<p>3. Herbs have _____ and _____ stems.</p>
 <p>Grapevine Pea Money Plant</p>	<p>3. Climbers have _____ and _____ stems.</p>

IX. Complete the chart by dragging the words to where they belong.

Types of Plants			
Trees Examples: 1. _____ 2. _____ 3. _____	4. _____ Examples: Rose Bush 5. _____ Cotton Plant	6. _____ Examples: 7. _____ Coriander Mint	Climbers Examples: 8. _____ Grapevine 9. _____

Mango Plant

Wheat

Beanstalk

Herbs

Coconut Plant

Bougainvillea

Neem Tree

Shrubs

Money Plant