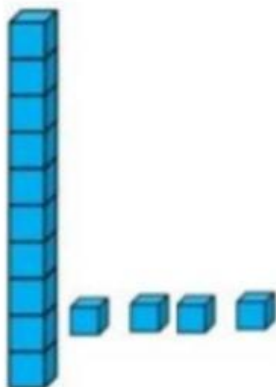
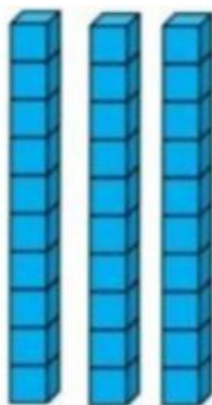
	<b>Taller de preparación</b> <b>MIDTERM – 1ST TERM</b>	
	<b>SUBJECT: Mathematics</b>	<b>GRADE: TR.</b> <b>A - B - C</b>
	<b>TEACHER: Estefanía Guerrero</b>	
	<b>NAME:</b>	
	<b>DATE:</b>	

- 1.** Directions: Look at the picture. Choose the correct number that matches the amount.



- a. 10
- b. 14
- c. 15

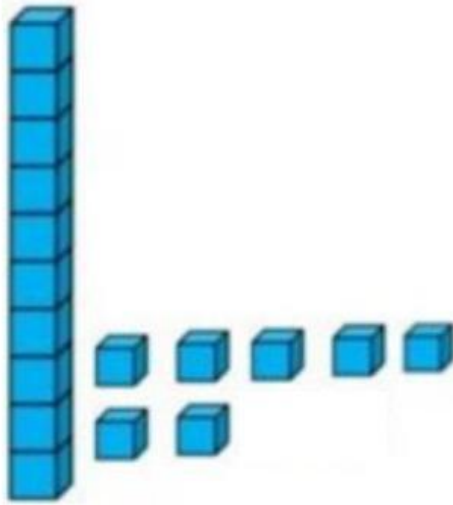
- 2.** Directions: Look at the picture. Choose the correct number that matches the amount.



- a. 40
- b. 30
- c. 20

3.

**Directions:** Look at the picture. **Write** the correct number that matches the amount.



\_\_\_\_\_

4.

**Directions:** Choose the correct answer to the question.  
**How do you write the number sixteen?**

sixteen

a. 60

b. 16

c. 61

5.

**Directions:** Choose the correct answer to complete the sentence. **The boy sees the number\_\_\_\_\_.**



a. seventeen

b. seven

c. seventy






6.

**Directions:** Circle the **teen family** numbers.  
Remember: **Teen family** always starts with the **number 1**.



7.

**Directions:** Let's **count 10 by 10**. Choose the correct number to complete the sequence.

 10	 20	 30	 40	 _____ _____ _____
---	---	---	--	--


a. 49

b. 41

c. 50

8.


**Directions:** Look at the picture. Choose the groups of ten fishes. Then answer the question.



**Answer:** How many groups of ten do you see? \_\_\_\_\_

9.

**Directions:** Look at the picture. Choose the correct answer.  
**Which shape is the book?**



- a. rectangle
- b. triangle
- c. square

10.

**Directions:** Look at the picture. Choose the correct answer.  
**What is the shape of the table?**



- a. square
- b. trapezium
- c. parallelogram

11.

**Directions:** Look at the TV picture.

How many **sides** | — does the **rectangle** of the TV have?



a. 2 sides

b. 4 sides

c. 3 sides

12.

**Directions:** Look at the house picture.

How many **vertices** ∟ does the **triangle** of the house have?




a. 2 vertices

b. 4 vertices

c. 3 vertices

13.

**Directions:** Look at the picture. **How many rectangles do you see?**



**Answer:** I can see \_\_\_\_\_ rectangles.

14.

**Directions:** Look at the picture. Choose the correct answer.  
**How many centimeters long is the eraser?**



- a. 6 centimeters
- b. 9 centimeters
- c. 10 centimeters