

Mathematics

Topic: Ringgit Malaysia

Answer the questions below.



Chocolate milk
RM 2



A piece of cake
RM 3




A piece of donut
RM 1






An apple
50 sen



A pencil
RM 1



A box of coloured pencils
RM 4

| | |
|--|--|
| 1. Haura has  . Which of the following items above that she can buy? | |
| 2. Hakim wants to buy a box of coloured pencil. How many  he needs to buy it? | |
| 3. Peter wants to buy a pencil and a chocolate milk. How much he should pay? | |
| 4. You have  Then you buy a piece of cake. How much your money left? | |
| 5. Arissa wants to buy a box of coloured pencils and a pice of cake. How much she should pay? | |