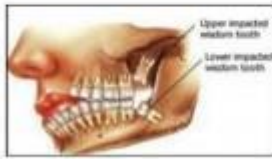






Evidence of Evolution

A. Drag the terms inside the box and match it with the corresponding pictures.

Fossil	Analagous structures
Vestigial structures	Homologous structures

	
	<div style="display: flex; justify-content: space-around; font-size: small;"> Shark (fish) Penguin (bird) Dolphin (mammal) </div>  <div style="display: flex; justify-content: space-around; font-size: x-small;"> Fish Wing Flipper </div>
	
	



B. Choose the correct answer for the following statements.

1. Fossils are _____.
2. An example of a vestigial structure is _____.
3. Comparison of DNA sequences shows that we are most closely related to _____.
4. Studying embryology helps scientists understand _____.
5. Scientists compare DNA from living organisms to identify _____.
6. Biogeography _____.

