
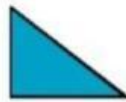



1ST GRADE - MATHS

SHAPES AND PATTERNS

INTERACTIVE WORKSHEET 01

I. Choose the figure that are made up of curved lines.



II. Write 'SL' for figures made up of straight lines and 'CL' for figures made up of curved lines.



III. Count the number of straight lines and curved lines in the following figure.



Number of straight lines =

Number of curved lines =

GALAXY

ESCHOOL



LIVEWORKSHEETS