

3RD GRADE - MATHS

MEASUREMENT

INTERACTIVE WORKSHEET 05

I. Write the correct unit -g, mg or kg - to weigh the following items

























II. Match the following.

	Objects	Weights
(a)	3 kg watermelon 	 200 g  100 g  50 g
(b)	600 g tomatoes 	 1 kg  2 kg
(c)	350 g butter 	 100 g  500 g
(d)	8 kg rice 	 1 kg  2 kg  5 kg

GALAXY

ESCHOOL

