



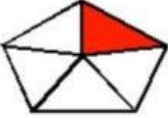





# 3RD GRADE - MATHS

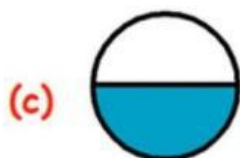
## FRACTIONS

### INTERACTIVE WORKSHEET 01

I. Write the the fraction for the coloured parts.

Figure	Fraction	Figure	Fraction
(a) 	$\frac{3}{8}$	(b) 	<input type="text"/>
(c) 	<input type="text"/>	(d) 	<input type="text"/>
(e) 	<input type="text"/>	(f) 	<input type="text"/>
(g) 	<input type="text"/>	(h) 	<input type="text"/>

II. Choose the shapes which represents  $\frac{1}{2}$ .



# GALAXY

# ESCHOOL

