

2 Animals can be grouped into vertebrates and invertebrates.

Look at the pictures.




lizard




rhino



ladybird



worm



fox



butterfly

Not drawn to scale

(a) Write down the names of each animal in the correct group.

vertebrate	invertebrate

[2]

(b) Some animals have a skeleton on the outside of their body.

Write down the name of this type of skeleton.

..... [1]

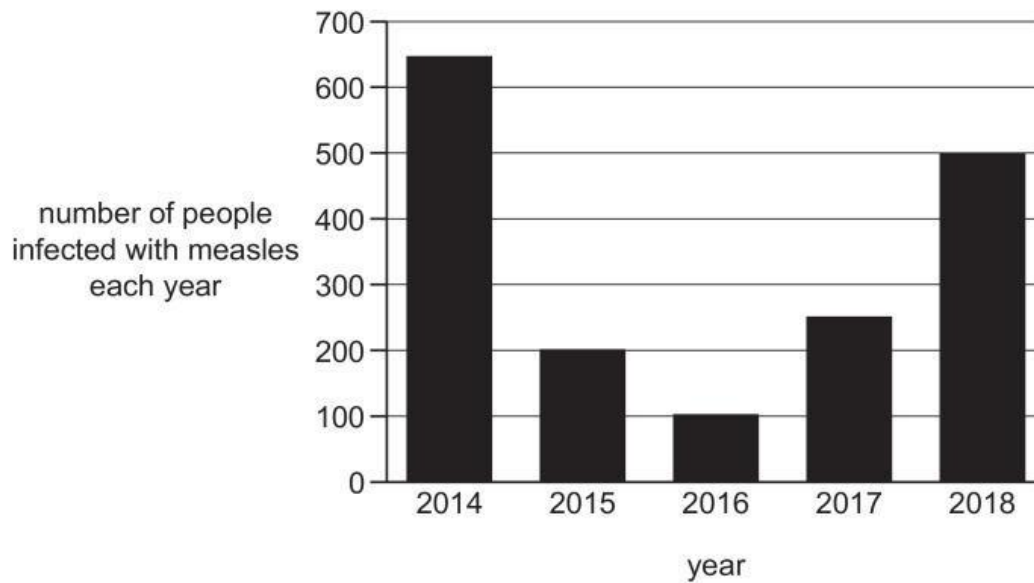
(c) One function of the skeleton is to help animals move.

Write down **one other** function of the skeleton.

..... [1]

8 Measles is an infectious disease.

The bar chart shows the number of people infected with measles for one country.



(a) How many people were infected with measles in 2016?

.....

[1]

(b) Vaccination is used to prevent people getting measles.

Read this sentence.

**‘After 2016 fewer people in the country
were vaccinated to prevent them getting measles.’**

Explain how the data in the bar chart supports this sentence.

.....

.....

[1]