


## Polygons

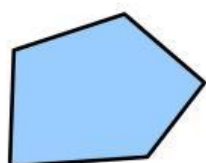
1. Classify the following objects:



- LINE
- LINE
- RAY
- RAY
- SEGMENT

.....

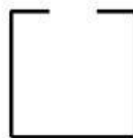
2. Is this figure a polygon?



Yes  No



Yes  No

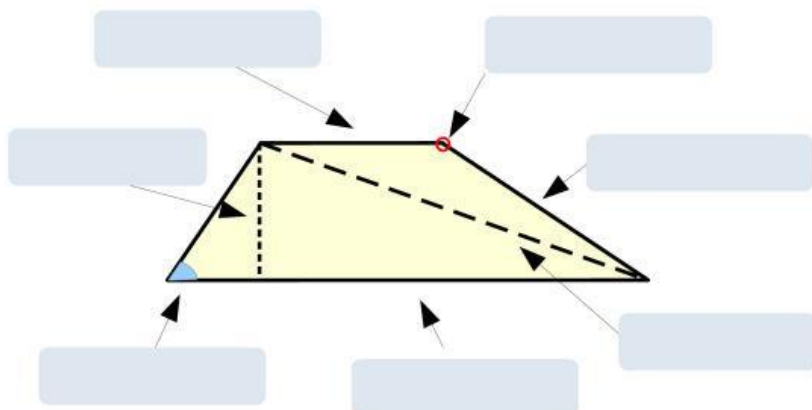


Yes  No



Yes  No

3. Choose the correct label:




- (MAJOR) BASE
- (minor) base
- DIAGONAL
- HEIGHT
- SIDE
- ANGLE
- VERTEX

4. Match the figures with their names:



.....



.....



.....



.....

- triangle
- square
- parallelogram
- rectangle