
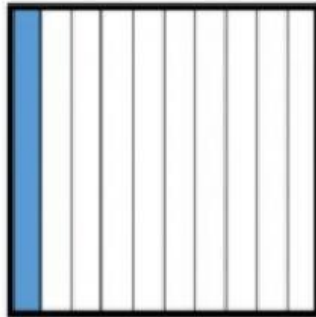


Ms. Marwa Abu Najm


Model and describe tenths



$$\frac{\boxed{\phantom{0}}}{10} = \boxed{\phantom{00}}$$



$$\frac{\boxed{\phantom{0}}}{10} = \boxed{\phantom{00}}$$



$$\frac{\boxed{\phantom{0}}}{10} = \boxed{\phantom{00}}$$