

LKPD

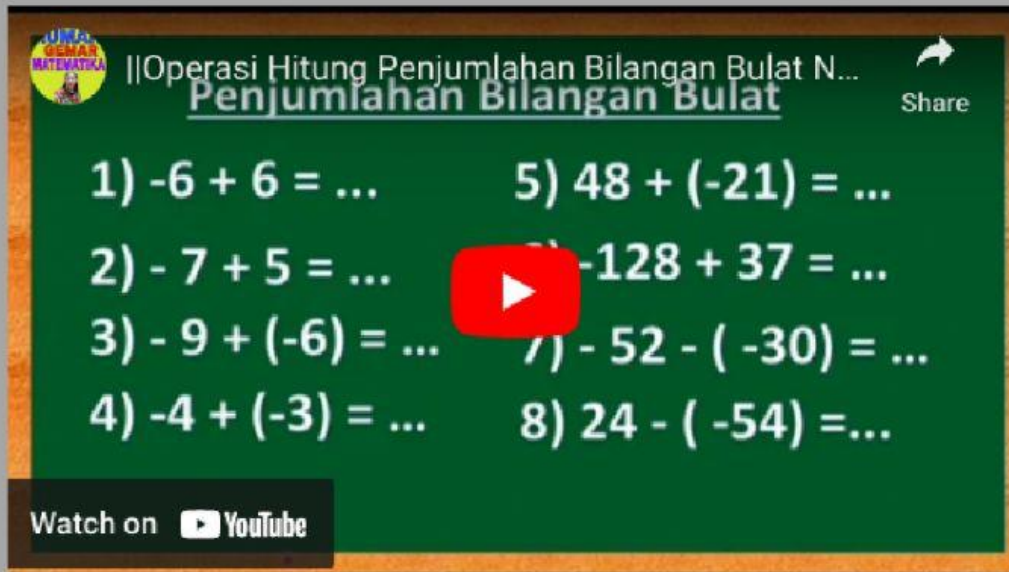
Bilangan positif dan negatif

Matematika
Kelas VI



Tahun ajaran 2022/2023


Sebelu anak-anak menjawab pertanyaan di bawah silakan simak terlebih dahulu vidio berikut



UIN
GENAR
MATEMATIKA

||Operasi Hitung Penjumlahan Bilangan Bulat N...
Penjumlahan Bilangan Bulat Share

1) $-6 + 6 = \dots$ 5) $48 + (-21) = \dots$
2) $-7 + 5 = \dots$ 6) $-128 + 37 = \dots$
3) $-9 + (-6) = \dots$ 7) $-52 - (-30) = \dots$
4) $-4 + (-3) = \dots$ 8) $24 - (-54) = \dots$

Watch on  YouTube

Name: _____

Bilangan positif



Using the number line to show your work, complete the addition following the example.



$$4 + 3 = \text{Donut with } 7$$

$$-8 + 1 = \text{Donut}$$



$$-1 + 1 = \text{Donut}$$

$$9 + 1 = \text{Donut}$$



$$7 + 2 = \text{Donut}$$

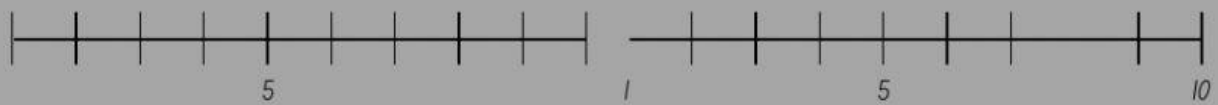
$$-6 + 3 = \text{Donut}$$

=



$4 + 4 =$

$1 + 6 =$



$3 + (-4)$

$9 + 0 =$



$6 + 2 =$

$3 + 7 =$



$2 + 3 =$

$8 + 2 =$