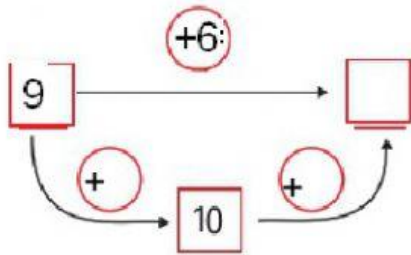
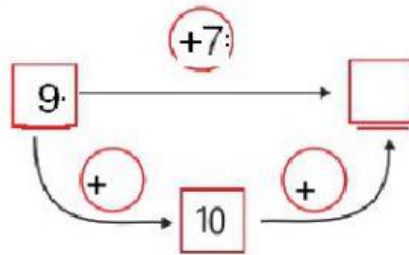


Υπολογίζω και συμπληρώνω τους αριθμούς που λείπουν.

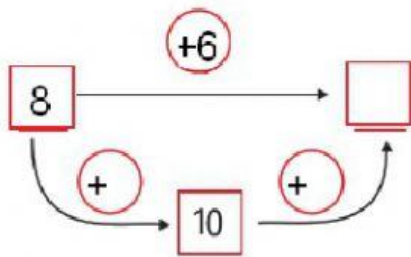
$9+6= \square$



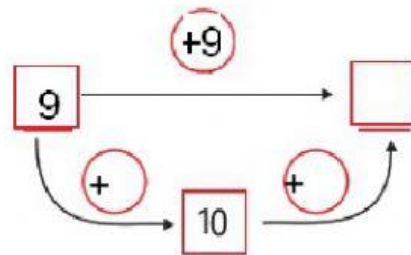
$9+7= \square$



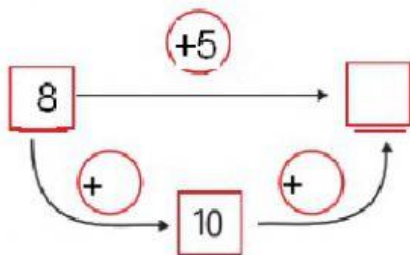
$8+6= \square$



$9+9= \square$



$8+5= \square$



$7+5= \square$

