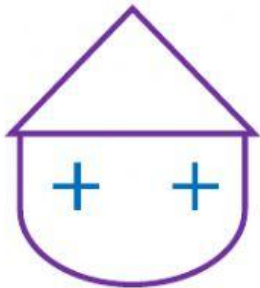


**Worksheet # 4**

**Grade 2**

**Topic: Straight Lines & Curved Lines,  
Types of Straight Lines, 3D Shapes,  
Multiplication Tables**

**Q.1 Count and write the number of vertical lines, horizontal lines, slanting lines and curved lines.**



Vertical Lines = \_\_\_\_\_

Horizontal Lines = \_\_\_\_\_

Slanting Lines = \_\_\_\_\_


Curved Lines = \_\_\_\_\_

Vertical Lines = \_\_\_\_\_

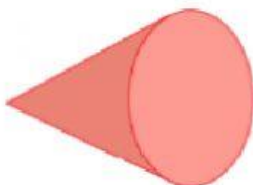
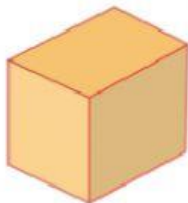
Horizontal Lines = \_\_\_\_\_

Slanting Lines = \_\_\_\_\_






Curved Lines = \_\_\_\_\_



**Q.2 Match the given 3D shape with its correct flat face.**



**Q.3 Read the multiplication table and select the correct answer.**

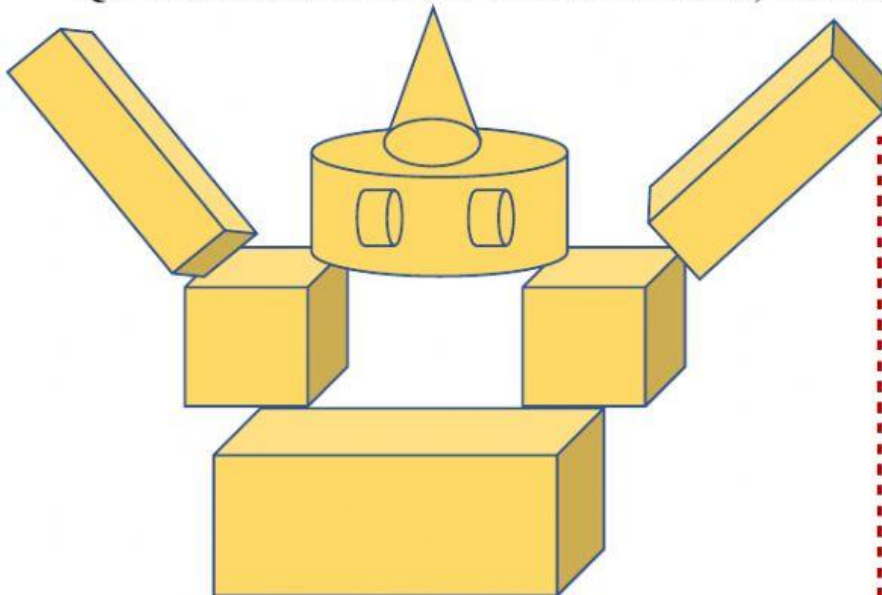


Here,		
D = 15	E = 24	L = 36
N = 18	O = 84	W = 28

Now arrange the alphabets according to the answer of clouds and guess what message is given by the raindrops.



**Q.4 Count and write the number of cubes, cuboids, cones, cylinders and spheres.**



CUBES = \_\_\_\_\_

CUBOIDS = \_\_\_\_\_

SPHERES = \_\_\_\_\_

CONES = \_\_\_\_\_

CYLINDERS = \_\_\_\_\_