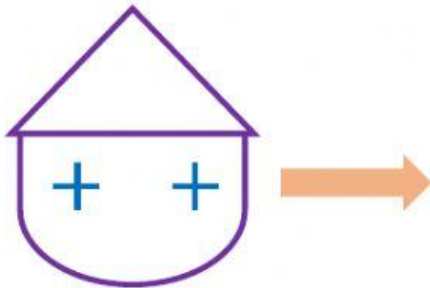


Worksheet # 4

Grade 2

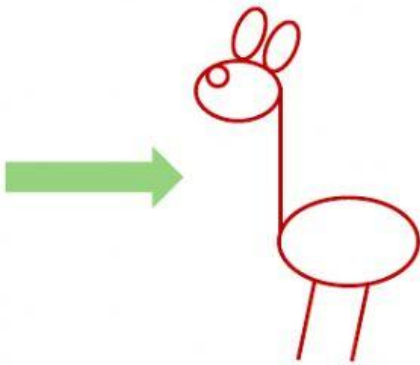
**Topic: Straight Lines & Curved Lines,
Types of Straight Lines, 3D Shapes,
Multiplication Tables**

Q.1 Count and write the number of vertical lines, horizontal lines, slanting lines and curved lines.

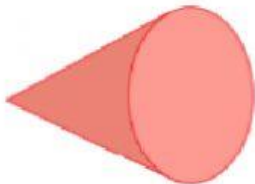
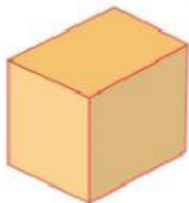


Vertical Lines = _____
Horizontal Lines = _____
Slanting Lines = _____
Curved Lines = _____

Vertical Lines = _____
Horizontal Lines = _____
Slanting Lines = _____
Curved Lines = _____



Q.2 Match the given 3D shape with its correct flat face.




Q.3 Read the multiplication table in the cloud, drag the answer from the table and drop it in the raindrop. Also write the letters of the riddle in the respective boxes.

48	50	24	27
T	K	R	Y
28	72	56	18
A	H	W	M

 <input type="text"/>	 <input type="text"/>	 <input type="text"/>	 <input type="text"/>
------------------------------	------------------------------	------------------------------	------------------------------

Q.4 Count and write the number of cubes, cuboids, cones, cylinders and spheres.



CUBES = _____

CUBOIDS = _____

SPHERES = _____

CONES = _____

CYLINDERS = _____