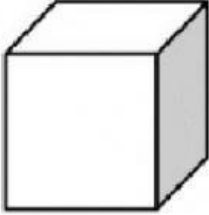
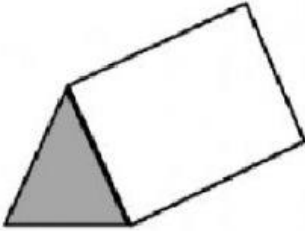
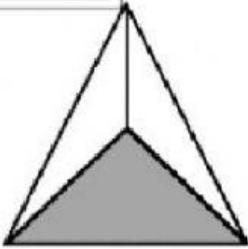


3D shapes and properties

1. Write the number of faces, edges and vertices for each of the 3D shapes given below.

CUBE	
Faces: <input type="text"/>	
Edges: <input type="text"/>	
Vertices: <input type="text"/>	

PRISM	
Faces: <input type="text"/>	
Edges: <input type="text"/>	
Vertices: <input type="text"/>	

TRIANGULAR PYRAMID	
Faces: <input type="text"/>	
Edges: <input type="text"/>	
Vertices: <input type="text"/>	