

Name: _____ Roll No : _____ Class : 2 Section : _____

Worksheet # 03

Topic : Ordinal numbers, Even and odd numbers, Fractions, 6 times table

Q.1 Select the 2nd , Sixth and 11th flower (left to right).

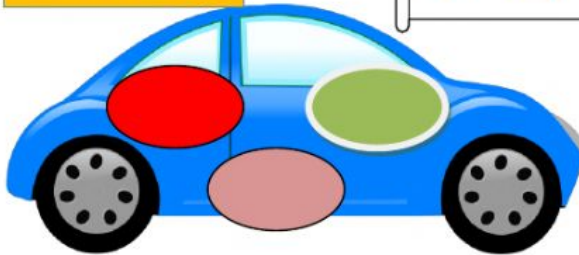


Q.2 Pick the numbers and put them in their respective car.

Even numbers

15, 630, 5 042, 6 019, 7, 988

Odd numbers



Q.3 Match with the correct option.

5×6

3×6

12×6

9×6

1×6

$50 + 4$

72

6

3 Tens

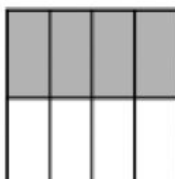
Eighteen

Q.4 Complete the table.

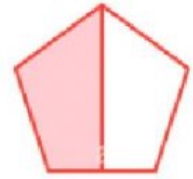
Cardinal number	Ordinal number in figures	Ordinal number in words
13		
	11 th	
		Eighth
Nineteen		

Q.5 Look at the colored parts of each shape and write the fraction in figures.



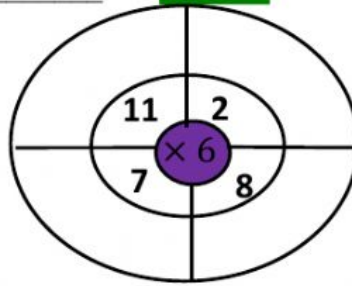






Name: _____ Roll No : _____ Class : 2 Section : _____

Q.6 Complete the wheel.



Q.7 Look at the position of children and fill in the blanks.



Sara



Ali



Fiza



Hamza



Ayesha



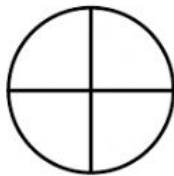
Hira




Ezzan

- _____ is at sixth position.
- Fiza is at _____ position.
- _____ is between Hamza and Hira.
- Ezaan is at _____ position.
- _____ is at 2nd position.

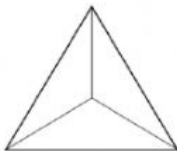
Q.8 Look at the equal parts of a shape and match with the name of equal parts .



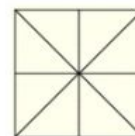
Thirds



Eighths



Quarters



Q.9 Write the odd numbers between 13 and 25.

13, _____, _____, _____, _____, _____, 25

Q.10 Tick the shapes which have equal parts.

