







I. How long will it take the minute hand to move from first picture to second picture?








II. Choose the correct time.



4 minutes after 5 o'clock

20 minutes after 5 o'clock



5 minutes after 10 o'clock

10 minutes after 1 o'clock



15 minutes after 7 o'clock














3 minutes after 7 o'clock



6 minutes after 8 o'clock

30 minutes after 8 o'clock

### III. Drag and drop the correct time.

	<b>1 hour later</b> 	
	<b>1 hour before</b> 	
	<b>2 hours later</b> 	
	<b>2 hours before</b> 	
	<b>5 hours later</b> 