



NAME: _____

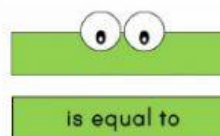
Compare the following numbers and select the correct symbol.



Greater than



Less than



Equal to

3 _____ 13



19 _____ 14



15 _____ 15



20 _____ 10



6 _____ 11



10 _____ 10

