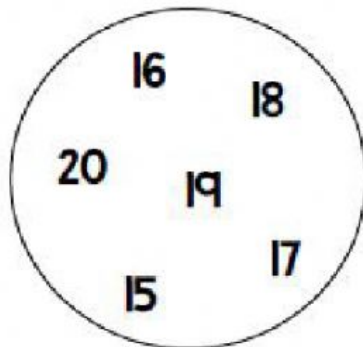


Number Patterns

Name: _____

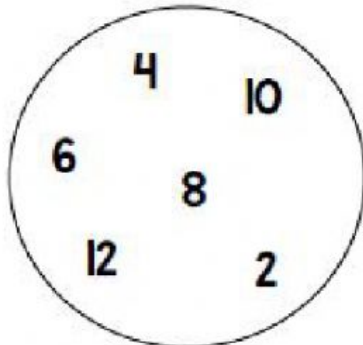
Use the numbers in each circle to make pattern.

Look at the number patterns and fill in the blanks with the correct answers.



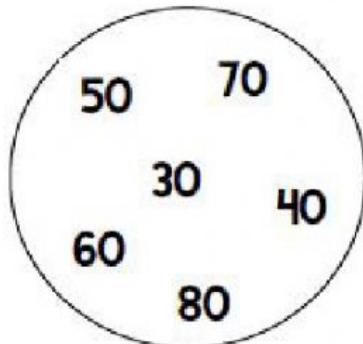
17

Count _____ by _____



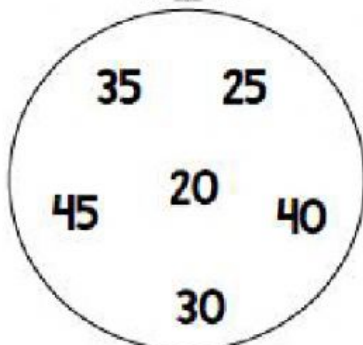
8

Count _____ on _____ by _____



80

Count _____ back _____ by _____



30

Count _____ by _____