



Name: _____

Date: _____

Class: _____




TELLING THE TIME



one o'clock



two o'clock



three o'clock



seven o'clock



eight o'clock



nine o'clock



four o'clock



five o'clock



six o'clock



ten o'clock



11 o'clock



12 o'clock

Half past ten

Half past eleven



DAYS OF A WEEK



Mon



Tue



Wed



Thu



Fri



Sat



Sun

MONTHS OF THE YEAR



January



February



March



April



May



June



July



August



September



October



November



December



1. Write the time under each clock.

o'clock half past



5 o'clock



2. Circle the correct time.

(a)



4 o'clock 5 o'clock 6 o'clock



7 o'clock 8 o'clock 9 o'clock 1 o'clock 2 o'clock 3 o'clock


(b)




It is 7 o'clock in the morning.



It is 10 o'clock in the morning.



It is 3 o'clock in the afternoon.



It is 5 o'clock in the afternoon.

3. Write these months of the year in the right order.

June

November

September

February

December

August

July

January

May

March

April

October

4. Write the correct day in the blank.

Monday Tuesday Wednesday Thursday Friday Saturday Sunday


Sunday	Monday	
--------	--------	--

	Tuesday	Wednesday
--	---------	-----------

Thursday		Saturday
----------	--	----------

	Friday	Saturday
--	--------	----------

5. Complete the table.



The day before	Today	The day after
	Thursday	
Sunday		
		Sunday
	Tuesday	