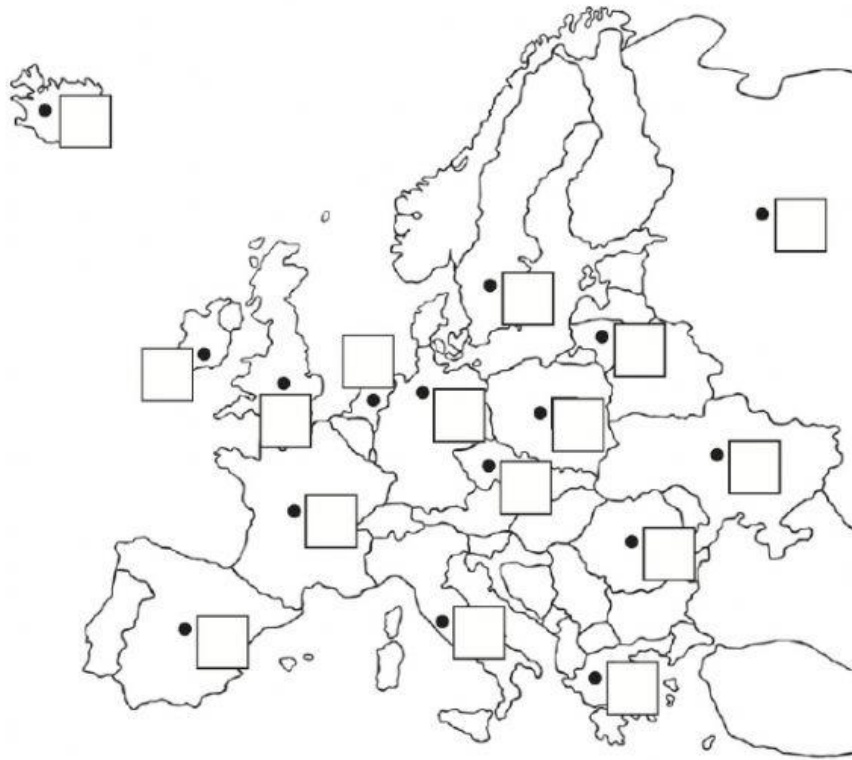


# COUNTRIES OF EUROPE

## POLITICAL MAP

Type the number for each country in the correct box:



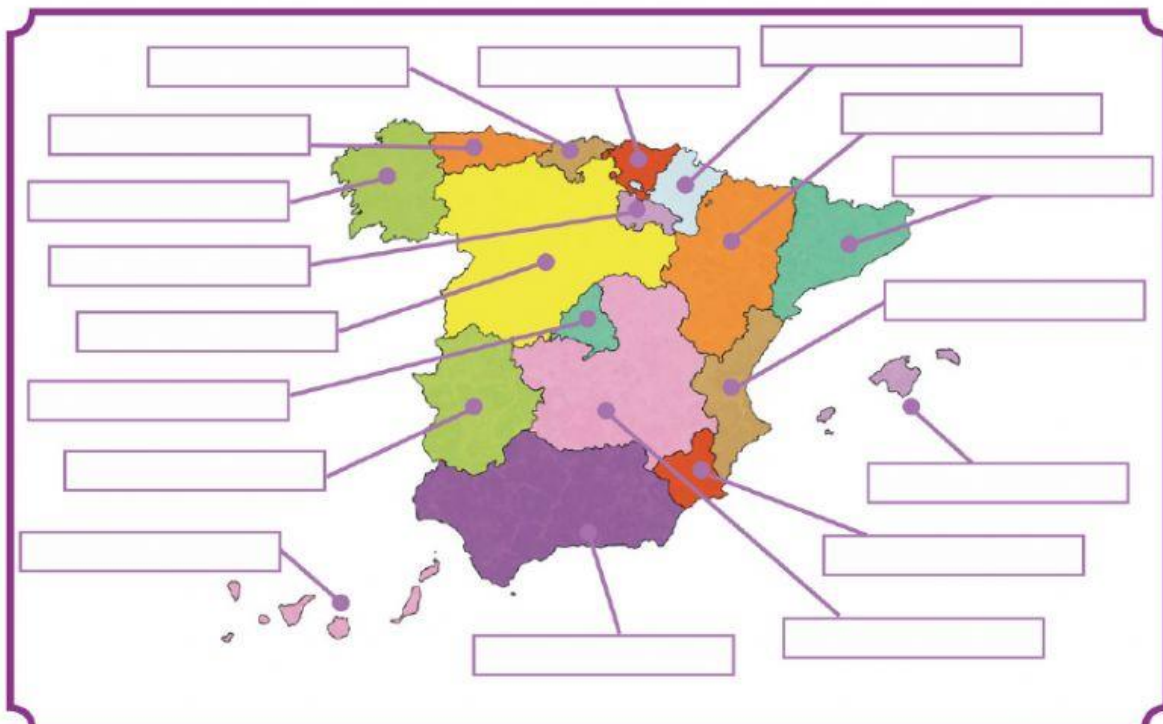
### Key

- |   |                |    |           |
|---|----------------|----|-----------|
| 1 | Iceland        | 9  | Sweden    |
| 2 | Ireland        | 10 | Poland    |
| 3 | United Kingdom | 11 | Ukraine   |
| 4 | Spain          | 12 | Romania   |
| 5 | France         | 13 | Czechia   |
| 6 | Netherlands    | 14 | Lithuania |
| 7 | Italy          | 15 | Russia    |
| 8 | Germany        | 16 | Greece    |

# AUTONOMOUS COMMUNITIES AND CITIES OF SPAIN

## POLITICAL MAP

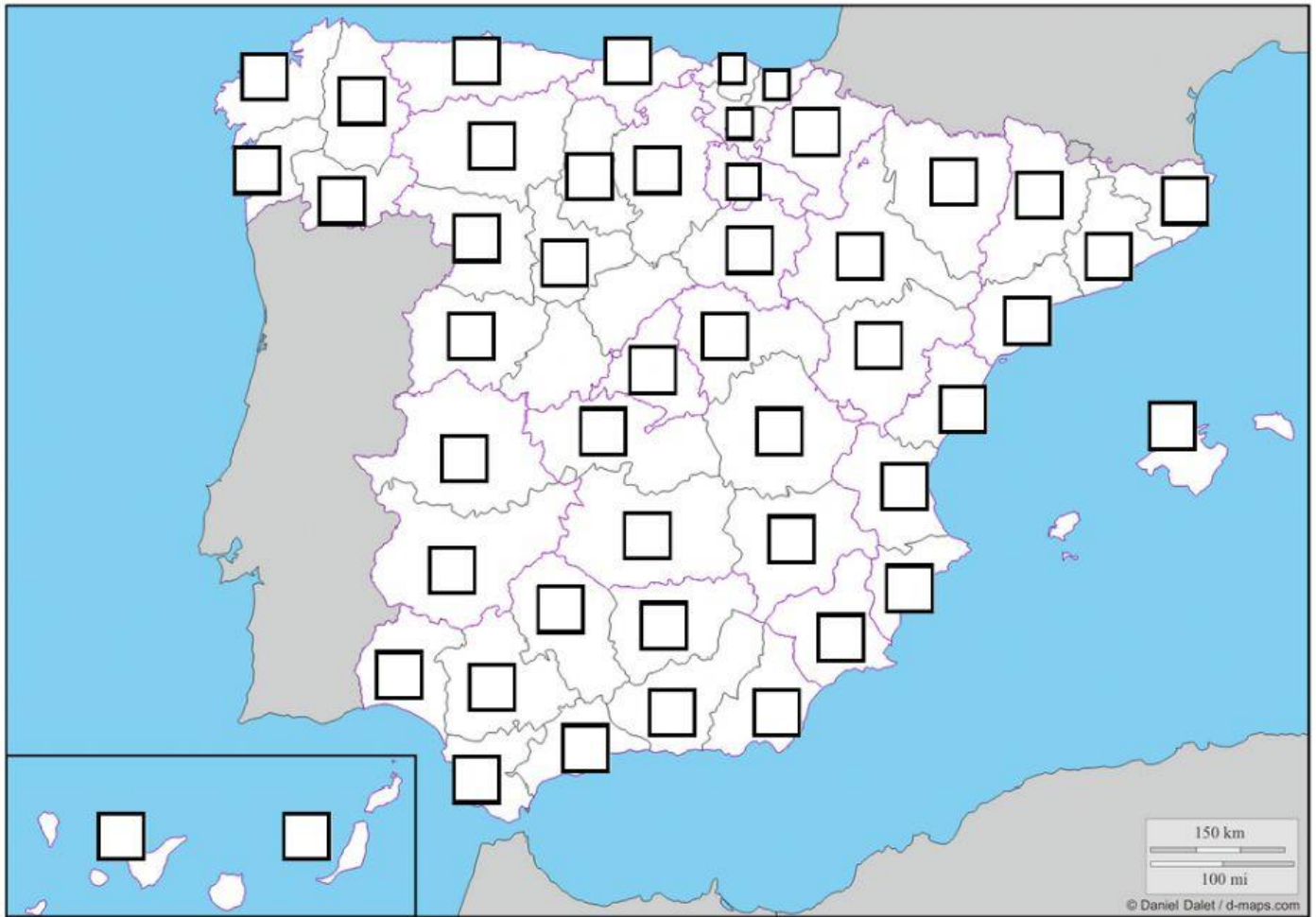
Type the names of the autonomous communities (in Spanish).



# PROVINCES OF SPAIN

## POLITICAL MAP

Type the number for each province in the correct box:

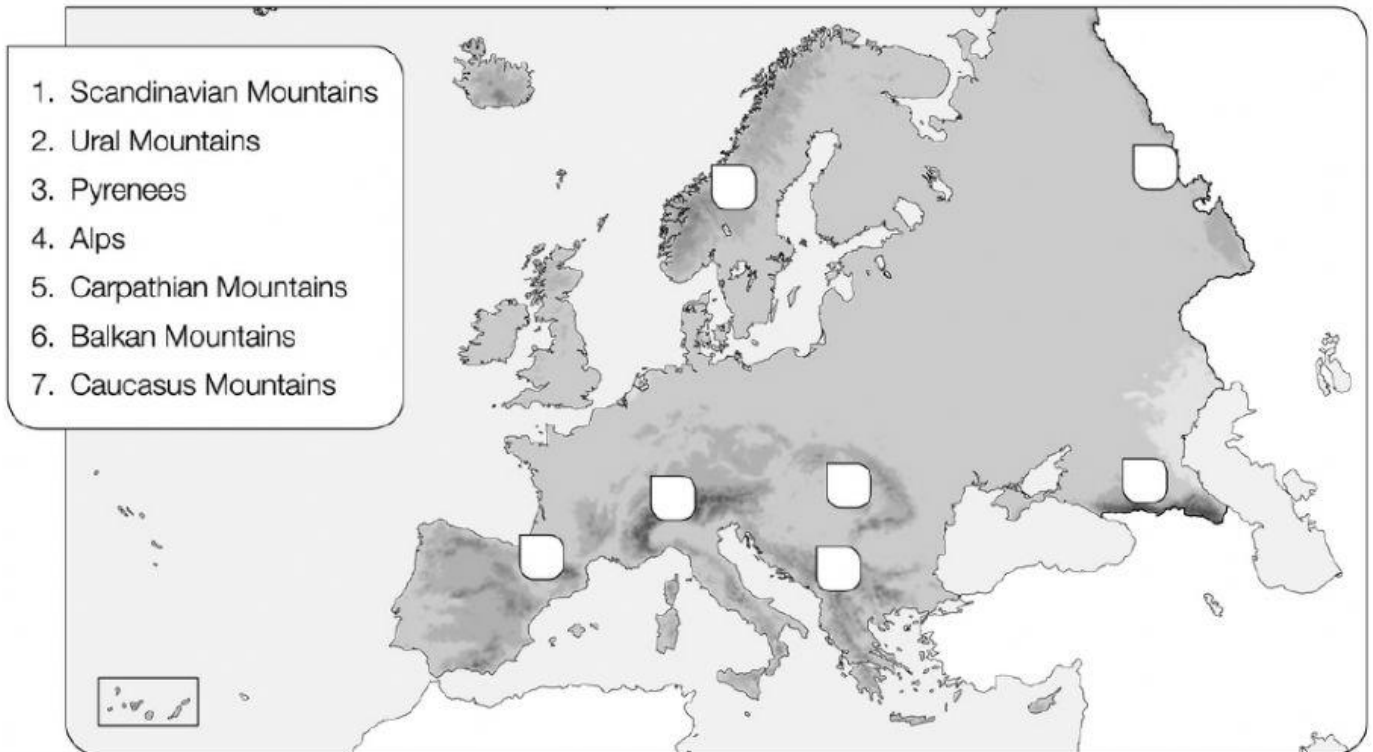


- |              |                 |                    |                           |                |
|--------------|-----------------|--------------------|---------------------------|----------------|
| 1. Álava     | 11. Cádiz       | 21. Huelva         | 31. Madrid                | 41. Sevilla    |
| 2. Albacete  | 12. Cantabria   | 22. Huesca         | 32. Málaga                | 42. Soria      |
| 3. Alicante  | 13. Castellón   | 23. Islas Baleares | 33. Murcia                | 43. Tarragona  |
| 4. Almería   | 14. Ciudad Real | 24. Jaén           | 34. Navarra               | 44. Teruel     |
| 5. Asturias  | 15. Córdoba     | 25. La Coruña      | 35. Orense                | 45. Toledo     |
| 6. Ávila     | 16. Cuenca      | 26. La Rioja       | 36. Palencia              | 46. Valencia   |
| 7. Badajoz   | 17. Gerona      | 27. Las Palmas     | 37. Pontevedra            | 47. Valladolid |
| 8. Barcelona | 18. Granada     | 28. León           | 38. Salamanca             | 48. Vizcaya    |
| 9. Burgos    | 19. Guadalajara | 29. Lérida         | 39. Sta. Cruz de Tenerife | 49. Zamora     |
| 10. Cáceres  | 20. Guipúzcoa   | 30. Lugo           | 40. Segovia               | 50. Zaragoza   |

# RELIEF OF EUROPE

## PHYSICAL MAP

Look at the map and type the number of each mountain chain.



Match the columns:

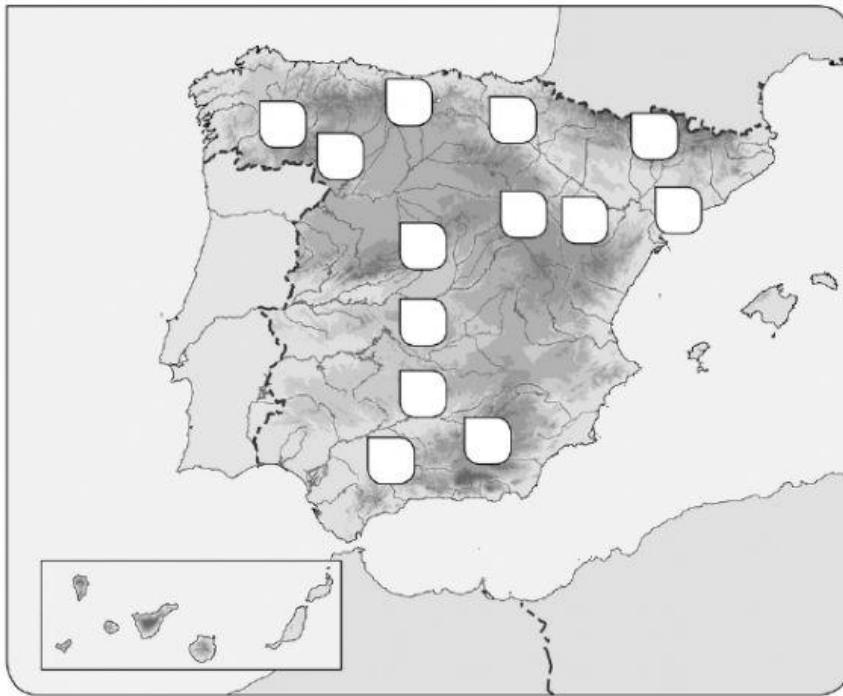
a. Mount Elbrus	3,349 m	Sicily
b. Mont Blanc	3,404 m	Pyrenees
c. Aneto	3,718 m	Alps
d. Teide	5,642 m	Tenerife
e. Etna	4,807 m	Caucasus Mountains



# RELIEF OF SPAIN

## PHYSICAL MAP

Look at the map and type the number of each landform:



1. Galician Massif
2. Cantabrian Chain
3. Central Mountain Chain
4. Mountains of Toledo
5. Iberian Mountain Chain
6. Basque Mountains
7. Betic Mountain Chain
8. Mountains of León
9. Sierra Morena
10. Pyrenees
11. Ebro river basin
12. Guadalquivir river basin
13. Catalan Coastal Chain

Type **B** (Balearic Islands) or **C** (Canary Islands):

- |                                     |                                    |                                       |  |
|-------------------------------------|------------------------------------|---------------------------------------|--|
| <input type="checkbox"/> La Gomera  | <input type="checkbox"/> Mallorca  | <input type="checkbox"/> Gran Canaria | <input type="checkbox"/> La Palma      |
| <input type="checkbox"/> Lanzarote  | <input type="checkbox"/> Ibiza     | <input type="checkbox"/> Tenerife     | <input type="checkbox"/> Menorca       |
| <input type="checkbox"/> Formentera | <input type="checkbox"/> El Hierro | <input type="checkbox"/> Cabrera      | <input type="checkbox"/> Fuerteventura |

# COASTS OF EUROPE

## PHYSICAL MAP

Type the type of coastal landform:

- a. Crete: \_\_\_\_\_ c. Finisterre: \_\_\_\_\_ e. Caspian: \_\_\_\_\_  
b. Gibraltar: \_\_\_\_\_ d. Bothnia: \_\_\_\_\_ f. Jutland: \_\_\_\_\_

# COASTS OF SPAIN

## PHYSICAL MAP

Locate these capes and gulfs (drag):



# RIVERS OF EUROPE

## PHYSICAL MAP

Match the three columns:

Mediterranean watershed  
Caspian Sea watershed  
Arctic watershed  
Atlantic watershed  
Black Sea watershed

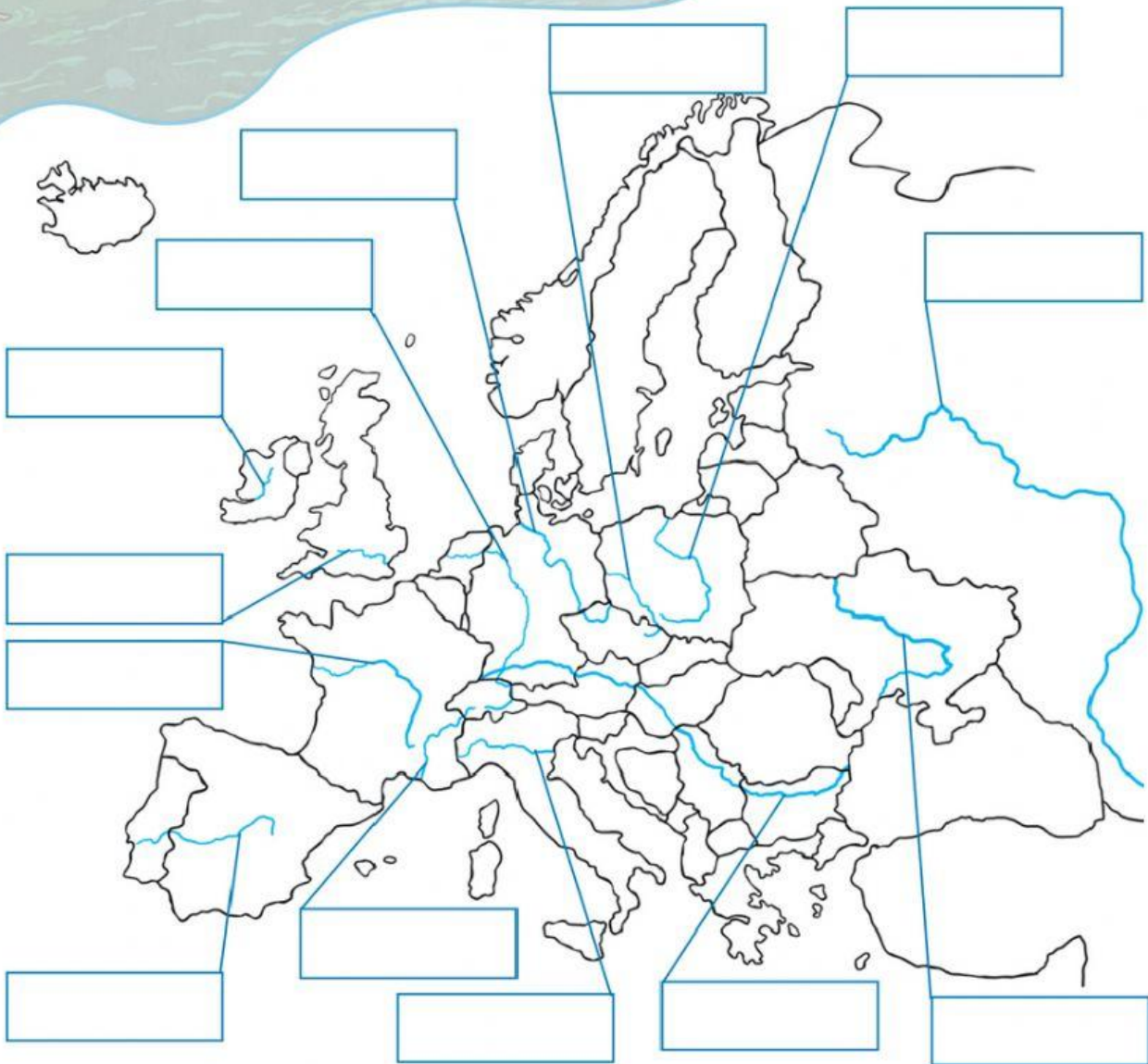
long rivers with abundant flow  
rivers with most abundant flow  
rivers with irregular flow  
rivers with abundant flow

the Volga  
the Pechora  
the Danube  
the Rhone  
the Rhine

# RIVERS OF EUROPE

## PHYSICAL MAP

Label the rivers of Europe using the labels at the bottom of the sheet.



visit [twinkl.com](https://www.twinkl.com)



Danube	Dnieper	Elbe	Thames	Loire	Vistula	Volga
Shannon	Rhône	Rhine	Tagus	Po	Oder	



# RIVERS OF SPAIN

## PHYSICAL MAP

Write C (Cantabrian watershed), M (Mediterranean watershed) or A (Atlantic watershed)

- |                                   |                                |                                 |                                  |
|-----------------------------------|--------------------------------|---------------------------------|----------------------------------|
| <input type="checkbox"/> Guadiana | <input type="checkbox"/> Nalón | <input type="checkbox"/> Segura | <input type="checkbox"/> Bidasoa |
| <input type="checkbox"/> Miño     | <input type="checkbox"/> Navia | <input type="checkbox"/> Duero  | <input type="checkbox"/> Eo      |
| <input type="checkbox"/> Nervión  | <input type="checkbox"/> Tajo  | <input type="checkbox"/> Ebro   | <input type="checkbox"/> Júcar   |

Type the names of the rivers of Spain (in Spanish):

