

CLASS: IV

CHAPTER 1: BUILDING WITH BRICKS

SUB: MATHS

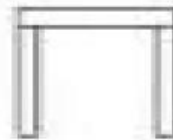
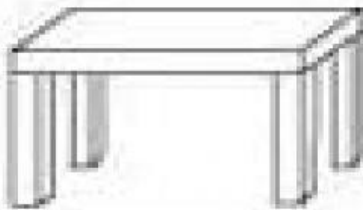
NAME: _____

Observe each image and select the view:


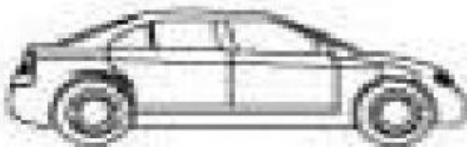
1)



2)



3)



4)



5)

