

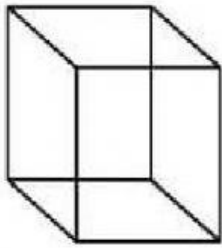
CLASS: IV

CHAPTER 1: BUILDING WITH BRICKS

SUB: MATHS

NAME: _____

Write the number of faces, edges and vertices for the given 3D shapes:

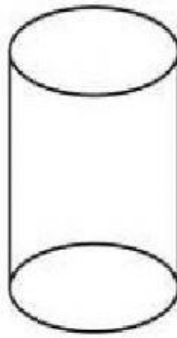


Cube

Face: _____

Edges: _____

Vertices : _____

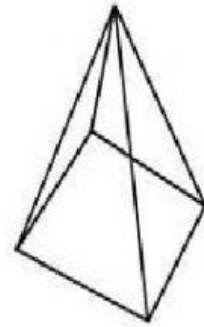


Cylinder

Face: _____

Edges: _____

Vertices : _____

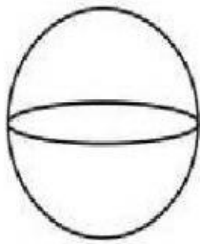


Pyramid

Face: _____

Edges: _____

Vertices : _____

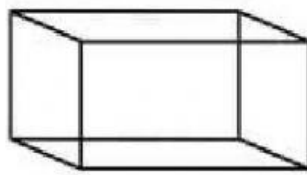


Sphere

Face: _____

Edges: _____

Vertices : _____



Rectangular Prism

Face: _____

Edges: _____

Vertices : _____



Cone

Face: _____

Edges: _____

Vertices : _____