
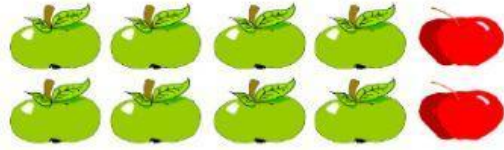


FRACTION OF A GROUP OR SET

What fraction of the set of apples is black?



What fraction of the group of apples is green?




What fraction of the group of apples is grey?



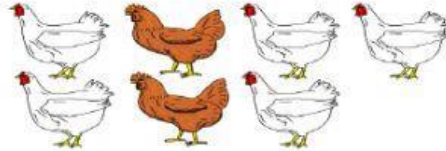
What fraction of the set of apples has leaves?



What fraction of the group of cows is brown?



What fraction of the chickens is white?



Shia has 8 pencils. Three of them do not have erasers on the end. What fraction of the pencils do not have erasers on the end?

Marlee has a small bag with 12 M&Ms in it. 5 of the M&Ms are yellow. 2 are green. 1 is orange. 4 are brown. What fraction of the M&Ms are brown?

Dinora ordered a pizza. It was divided into 8 equal slices. Dinora ate two slices right away and another slice before bed. What fraction of the pizza did she eat?

There are ten cookies in the cookie jar. 3 are Oreos. 2 are peanut butter cookies. 4 are chocolate chip cookies. 1 is a sugar cookie. What fraction of the cookies are peanut butter?