



2. Write the numbers.

a)




$$5000 + 200 + 70 + 8 = \underline{\hspace{2cm}}$$

b)




$$2000 + 50 = \underline{\hspace{2cm}}$$

c)



$$4000 + 200 + 7 = \underline{\hspace{2cm}}$$

d)



$$6000 + 30 + 5 = \underline{\hspace{2cm}}$$