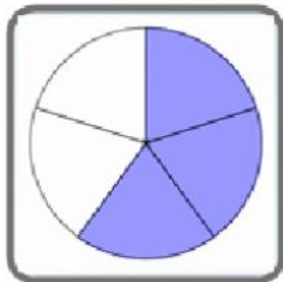

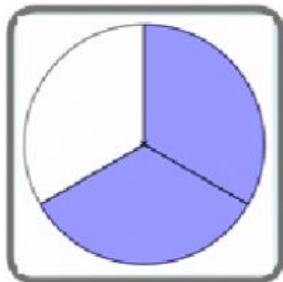



Name: _____

Draw a line between the matching fractions.



$$\frac{2}{3}$$

$$\frac{1}{4}$$

$$\frac{2}{4}$$

$$\frac{3}{5}$$

$$\frac{1}{2}$$