


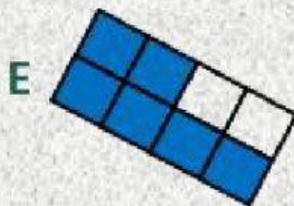

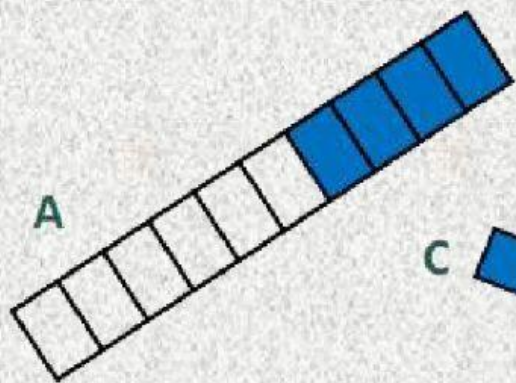



# Какая часть фигуры закрашена?



A)



B)



C)



D)



E)



F)



G)


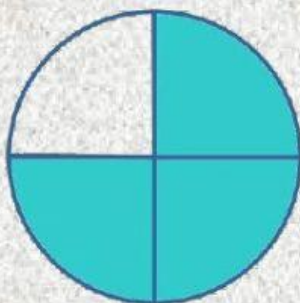
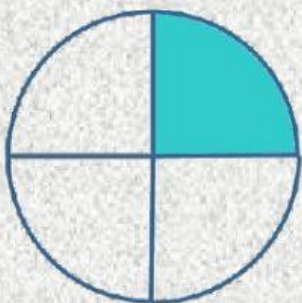





*a*      *b*      *c*      *d*      *e*




***Запиши дроби и сравни их!***






**Какая часть торта украшена розочками?**



**На какую часть торта поставили свечи?**



**Сравни эти дроби!**



**Спасибо за работу!**



Larisa  
Zavoronoka