









Solve for ELAPSED TIME!

Start Time	End Time	Elapsed Time
 10:05	 10:37	<u>32</u> minutes
		<u> </u> minutes
		<u> </u> minutes
		<u> </u> minutes

Solve for END TIME!

- 1** Megan starts eating breakfast at 9:54 AM. Tell what time she is done with breakfast if she takes the given number of minutes to eat.

a. 6 minutes _____
b. 10 minutes _____
c. 20 minutes _____
d. 24 minutes _____

- 3** Beth starts her homework at 4:56 PM. It takes her 15 minutes to finish. At what time does Beth finish her homework?

- 2** Jake starts cleaning his room at 3:51 PM. Tell what time he is done cleaning if he takes the given number of minutes to clean.

a. 9 minutes _____
b. 10 minutes _____
c. 19 minutes _____
d. 24 minutes _____

- 4** Dylan starts reading at 6:53 PM. He reads for 27 minutes. At what time does Dylan finish reading?

Solve for START TIME!

- 1** Caleb finishes breakfast at 7:15 AM. Tell what time he started breakfast if it took the given number of minutes.

a. 10 minutes _____
b. 15 minutes _____
c. 20 minutes _____
d. 25 minutes _____
e. 26 minutes _____

- 3** Lilly gets to school at 8:05 AM. It takes her 12 minutes to walk to school from her house. At what time did she leave home?

- 2** Melanie finishes washing the dishes at 6:20 PM. Tell what time she started washing dishes if it took the given number of minutes.

a. 5 minutes _____
b. 10 minutes _____
c. 15 minutes _____
d. 20 minutes _____
e. 25 minutes _____

- 4** Ryan gets off the bus at 4:09 PM. He rides the bus for 17 minutes to get home from school. At what time does Ryan get on the bus?