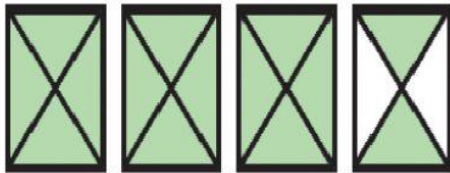



Name :



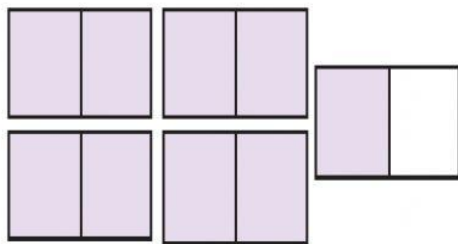
Write mixed number for each model:

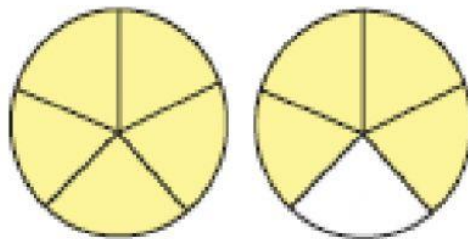


.....



.....





Write an equation that represent each mixed number as a sum of whole number and unit fractions :

$$4\frac{1}{4} = \boxed{\quad + \quad}$$

$$1\frac{5}{6} = \boxed{\quad + \quad + \quad + \quad + \quad}$$