

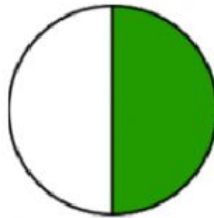
Name

Date

Fractions of Shapes 1.

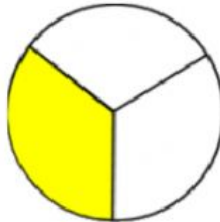
Draw a line to match each of the shaded circles to its fraction and to its word form:

$$\frac{1}{3}$$



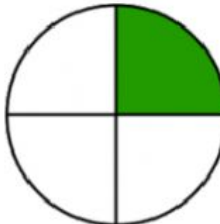
one quarter

$$\frac{1}{4}$$



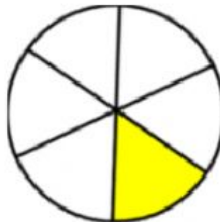
one third

$$\frac{1}{2}$$



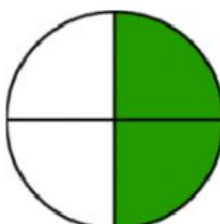
one half

$$\frac{2}{3}$$



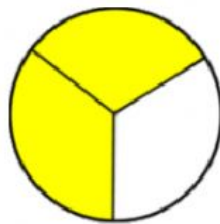
two quarters

$$\frac{2}{4}$$



two thirds

$$\frac{1}{6}$$



one sixth