

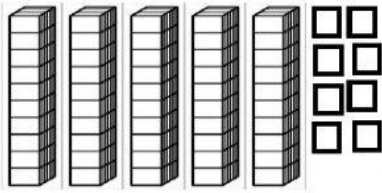
# Mathematics

## Fifty Family Numbers

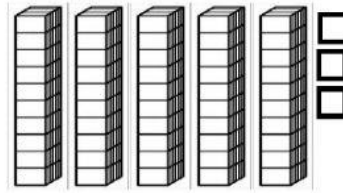


A. Type the Fifty family numbers

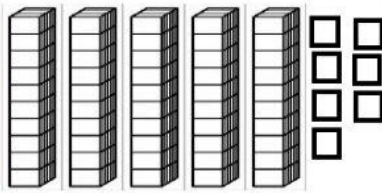

B. How many tens and ones?



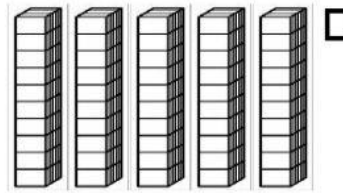
\_\_\_ tens \_\_\_ ones = \_\_\_



\_\_\_ tens \_\_\_ ones = \_\_\_



\_\_\_ tens \_\_\_ ones = \_\_\_



\_\_\_ tens \_\_\_ ones = \_\_\_

C. Fill in the missing number (before, after, between)

D. \_\_\_\_\_, 51

E. \_\_\_\_\_, 59

F. \_\_\_\_\_, 55

G. 58, \_\_\_\_\_

H. 50, \_\_\_\_\_

I. 57, \_\_\_\_\_

J. 54, \_\_\_\_\_, 56

K. 57, \_\_\_\_\_, 59

L. 55, \_\_\_\_\_, 57

Click the greatest (biggest) number in each set.

(M) 58

51

(N) 50

55

(O) 57

56

P. Which number doesn't belong?

59

50

58

51

17

53