


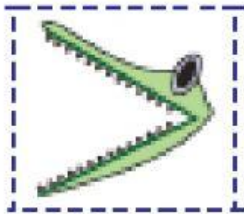


Name: _____

Mathematics

More Than Sign **>**

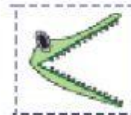
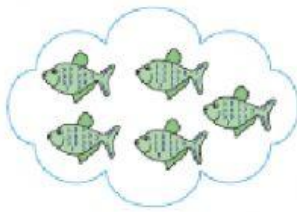
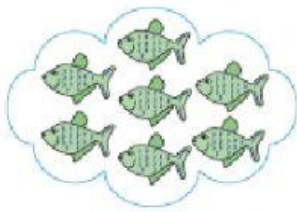
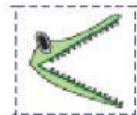
Find and choose ALL of the **more than** signs in the box below.



Choose the alligator that is showing the **more than** sign.





Put in the correct sign



5



2



9



6

