

DIVIDIM



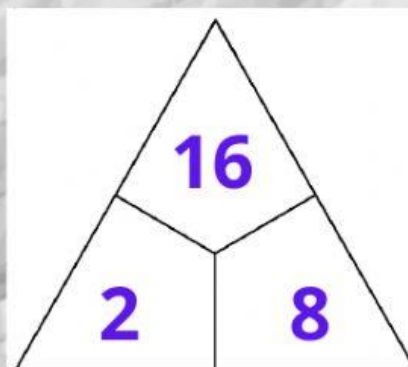
Completa les següents operacions:

$$2 \times 8 = 16$$

$$16 : 8 = 2 \quad R = 0$$

$$16 : 2 = \quad R =$$

$$17 : 2 = \quad R =$$



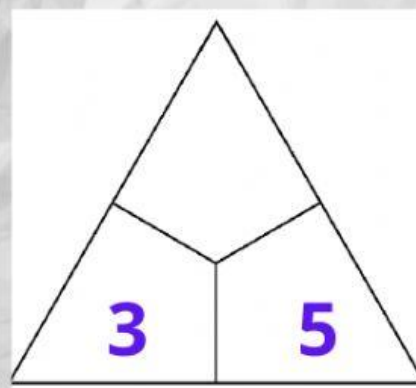
$$3 \times 5 =$$

$$15 : 5 = \quad R =$$

$$15 : 3 = \quad R =$$

$$16 : 3 = \quad R =$$

$$17 : 3 = \quad R =$$



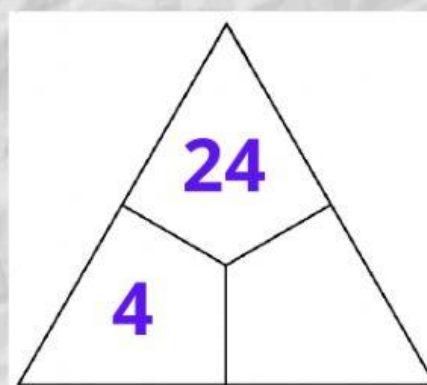
$$4 \times 6 =$$

$$24 : 6 = \quad R =$$

$$24 : 4 = \quad R =$$

$$26 : 4 = \quad R =$$

$$27 : 4 = \quad R =$$



$$5 \times 7 =$$

$$35 : 7 = \quad R =$$

$$35 : 5 = \quad R =$$

$$38 : 5 = \quad R =$$

$$39 : 5 = \quad R =$$

