



Carlton E. Francis Primary School
End of Month Quiz 2021 - Grade Two (2)
Mathematics
Concepts



Write the number that comes after. (5pts)

1. 1__3__5__

2. 67__69__71

Write the number that comes before. (6pts)

1. __88__90__92

2. __15__17__19

Pick the right Transitional Word.

Where is the monkey? (1pt.)



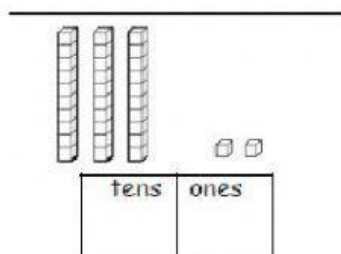
in

on

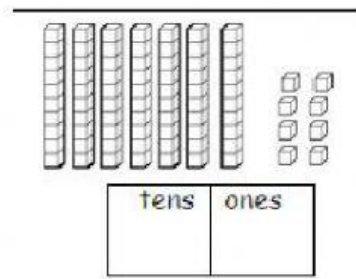
beside

How many? (4pts)

1.

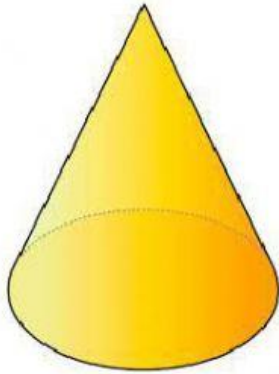


2.

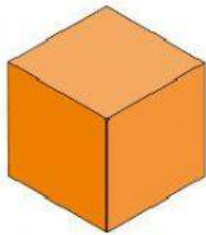


Give the of the name solid shapes. (2pts)

1.



2.



Total: (18 pts)