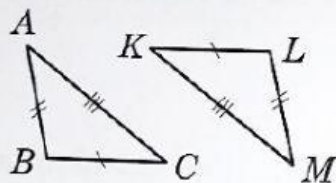


# Vienādības pazīmes!

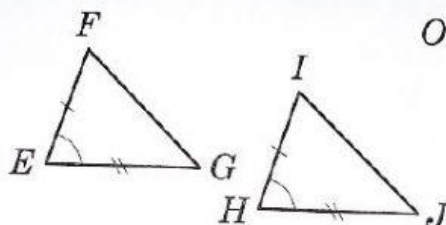
Vārds \_\_\_\_\_

1. Dotie trijstūri ir vienādi. Izmantojot attēlu, uzrakstīt trijstūru vienādības pazīmi.

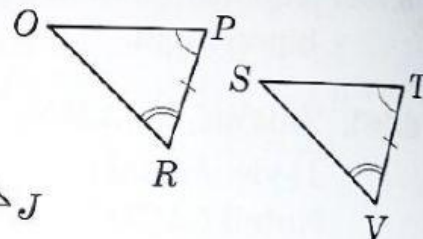
1)



2)

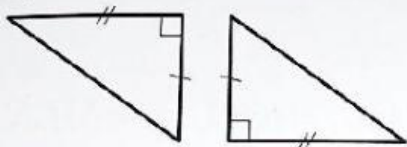


3)



2. Vai trijstūri ir vienādi pēc atbilstošās pazīmes?

1)



*mlm*

2)



*mlm*

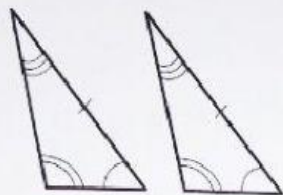
3)



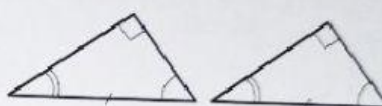
*lml*

3. Aplūkot vienādos trijstūru elementus un nosaukt attiecīgo trijstūru vienādības pazīmi.


1)



2)



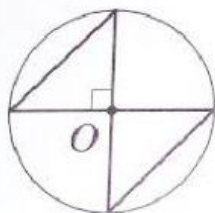
3)



4)

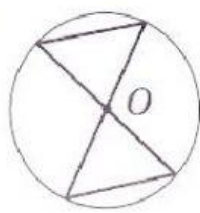


5)



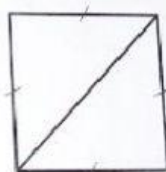
R.I. (O; r).

6)



R.I. (O; r).

7)



8)

